

Date :

NEET – 2016

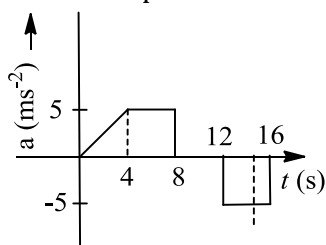
TEST ID: 36

Time : 03:00:00

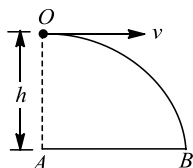
PCB

Marks : 720

1. Surface tension has the same dimensions as that of
 - a) Coefficient of viscosity
 - b) Impulse
 - c) Momentum
 - d) Spring constant
2. Dimensional formula for angular momentum is
 - a) ML^2T^{-2} b) ML^2T^{-1} c) MLT^{-1} d) $M^0L^2T^{-2}$
3. The acceleration of a train between two stations 2 km apart is shown in the figure. The maximum speed of the train is

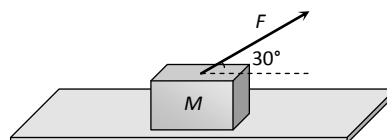


- a) 60ms^{-1} b) 30ms^{-1}
 - c) 120ms^{-1} d) 90ms^{-1}
4. An aeroplane is flying in a horizontal direction with a velocity 600kmh^{-1} at a height of 1960 m. when it is vertically above the point A on the ground, a body is dropped from it. The body strikes the ground at point B. Calculate the distance AB.



- a) 3.33 km
 - b) 333 km
 - c) 33.3 km
 - d) 3330 km
5. A projectile is thrown with a speed u at an angle θ to the horizontal. The radius of curvature of its trajectory when the velocity vector of the projectile makes an angle α with the horizontal is
 - a) $\frac{u^2 \cos^2 \theta}{g \cos^2 \theta}$ b) $\frac{2u^2 \cos^2 \theta}{g \cos^2 \theta}$ c) $\frac{u^2 \cos^2 \theta}{g \cos^3 \alpha}$ d) $\frac{u^2 \cos^2 \theta}{g \cos^2 \alpha}$
6. A block of mass $M = 5\text{ kg}$ is resting on a rough horizontal surface for which the coefficient of friction is 0.2. When a force $F = 40\text{ N}$ is applied, the acceleration of the block will be

$(g = 10\text{ ms}^{-2})$

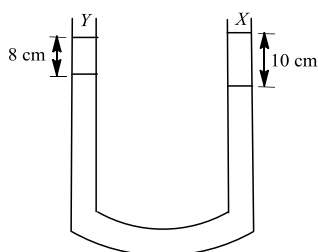


- a) 5.73 m/sec^2 b) 8.0 m/sec^2
 - c) 3.17 m/sec^2 d) 10.0 m/sec^2
7. The one-rupee coins are put on top of each other on a table. Each coin has a mass m . Which of the following statements is not true
 - The force on the 6th (counted from the bottom) due to all the coins on its top is equal to $4mg$ (downwards)
 - The force on the 6th coin due to 7th coin is $4mg$ (downwards)
 - The reaction of the 6th coin on the 7th coin is $4mg$ (upwards)
 - The total force on the 10th coin is $9mg$ (downwards)
8. A body moves a distance of 10 m along a straight line under the action of a force of 5 N. If the work done is 25 joules, the angle which the force makes with the direction of motion of the body is
 - a) 0° b) 30° c) 60° d) 90°
9. If the earth suddenly changes its radius x times the present value, the new period of rotation would be
 - a) $6x^2h$ b) $12x^2h$
 - c) $24x^2h$ d) $48x^2h$
10. A horizontal platform is rotating with uniform angular velocity around the vertical axis passing through its centre. At some instant of time a viscous fluid of mass ' m ' is dropped at the centre and is allowed to spread out and finally fall. The angular velocity during this period
 - a) Decreases continuously
 - b) Decreases initially and increases again
 - c) Remains unaltered
 - d) Increases continuously
11. LANDSAT series of satellites move in near polar orbits at an altitude of
 - a) 3600 km b) 3000 km
 - c) 918 km d) 512 km

12. A wire ($Y = 2 \times 10^{11} \text{ Nm}^{-2}$) has length 1 m and area of cross-section 1 mm^2 . The work required to increase its length by 2 mm is
 a) 400 J b) 40 J c) 4 J d) 0.4 J

13. An aeroplane of mass $3 \times 10^4 \text{ kg}$ and total wing area of 120 m^2 is in a level flight at some height. The difference in pressure between the upper and lower surface of its wings in kilo pascals is ($g = 10 \text{ ms}^{-2}$)
 a) 2.5 b) 5.0 c) 10.0 d) 12.5

14. A liquid X of density 3.36 g cm^{-3} is poured in a U-tube, which contains Hg. Another liquid Y is poured in left arm with height 8 cm, upper levels of X and Y are same. What is density of Y ?



- a) 0.8 gcc^{-1} b) 1.2 gcc^{-1}
 c) 1.4 gcc^{-1} d) 1.6 gcc^{-1}
15. A black body radiates energy at the rate of $E \text{ Wm}^{-2}$ at a high temperature $T \text{ K}$. When the temperature is reduced to $\left(\frac{T}{2}\right) \text{ K}$, the radiant energy is

- a) $\frac{E}{2}$ b) $2E$ c) $\frac{E}{4}$ d) $\frac{E}{16}$

16. A gas at pressure $6 \times 10^5 \text{ Nm}^{-2}$ and volume 1 m^3 and its pressure falls to $4 \times 10^5 \text{ Nm}^{-2}$, When its volume is 3 m^3 . Given that the indicator diagram is a straight line, work done by the system is

- a) $6 \times 10^5 \text{ J}$ b) $3 \times 10^5 \text{ J}$
 c) $4 \times 10^5 \text{ J}$ d) $10 \times 10^5 \text{ J}$

17. An ideal gas is heated at constant pressure and absorbs amount of heat Q . If the adiabatic exponent is γ , then the fraction of heat absorbed in raising the internal energy and performing the work, in

- a) $1 - \frac{1}{\gamma}$ b) $1 + \frac{1}{\gamma}$ c) $1 - \frac{2}{\gamma}$ d) $1 + \frac{2}{\gamma}$

18. The temperature of an ideal gas is reduced from 927°C to 27°C . The *r. m. s.* velocity of the molecules becomes

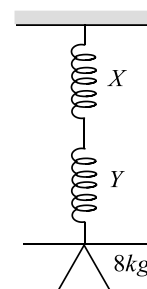
- a) Double the initial value
 b) Half of the initial value

- c) Four times the initial value
 d) Ten times the initial value

19. The equation of a simple harmonic wave is given by $y = 6 \sin 2\pi(2t - 0.1x)$, where x and y are in *mm* and t is in seconds. The phase difference between two particles 2 *mm* apart at any instant is

- a) 54° b) 72° c) 18° d) 36°

20. A body of mass 8 kg is suspended through two light springs X and Y connected in series as shown in figure. The readings in X and Y respectively are

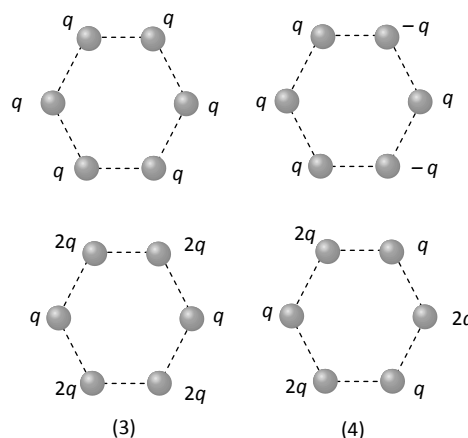


- a) 8 kg , zero b) zero, 8 kg
 c) 8 kg , 8 kg d) 2 kg , 6 kg

21. Two waves having equations $x_1 = a \sin(\omega t + \phi_1)$, $x_2 = a \sin(\omega t + \phi_2)$ If in the resultant wave the frequency and amplitude remain equal to those of superimposing waves. Then phase difference between them is

- a) $\pi/6$ b) $2\pi/3$ c) $\pi/4$ d) $\pi/3$

22. Figures below show regular hexagons, which charges at the vertices. In which of the following cases the electric field at the centre is not zero



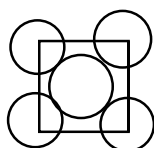
- a) 1 b) 2 c) 3 d) 4

23. A molecule with a dipole moment p is placed in an electric field of strength E . Initially the dipole is aligned parallel to the field. If the dipole is to be related to be anti-parallel to the field the work required to be done by an

- external agency is
 a) $-2pE$ b) $-pE$ c) pE d) $2pE$
24. The energy of a charged capacitor is U . Another identical capacitor is connected parallel to the first capacitor, after disconnecting the battery. The total energy of the system of these capacitors will be
 a) $\frac{U}{4}$ b) $\frac{U}{2}$ c) $\frac{3U}{2}$ d) $\frac{2U}{4}$
25. The length of a potentiometer wire is 5m. An electron in this wire experiences a force of $4.8 \times 10^{-19} \text{N}$, emf of the main cell used in potentiometer is
 a) 3 V b) 15 V c) 1.5 V d) 5 V
26. A wire of resistance 5.5 ohm is drawn out uniformly so that its length is increased twice. Then its new resistance is
 a) 44Ω b) 42Ω c) 40Ω d) 22Ω
27. Two bulbs are working in parallel order. Bulb A is brighter than bulb B. If R_A and R_B are their resistance respectively then
 a) $R_A > R_B$ b) $R_A < R_B$
 c) $R_A = R_B$ d) None of these
28. An arbitrary shaped closed coil is made of a wire of length L and a current I ampere is flowing in it. If the plane of the coil is perpendicular to magnetic field \vec{B} , the force on the coil is
 a) Zero b) IBL c) $2IBL$ d) $\frac{1}{2}IBL$
29. A solenoid has core of a material with relative permeability 500 and its windings carry a current of 1A. The number of turns of the solenoid is 500 per metre. The magnetization of the material is nearly
 a) $2.5 \times 10^3 \text{ Am}^{-1}$ b) $2.5 \times 10^5 \text{ Am}^{-1}$
 c) $2.0 \times 10^3 \text{ Am}^{-1}$ d) $2.0 \times 10^5 \text{ Am}^{-1}$
30. Two magnets A and B are identical in mass, length and breadth but have different magnetic moments. In a vibration magnetometer, if the time period of B is twice the time period of A. The ratio of the magnetic moments M_A/M_B of the magnets will be
 a) $1/2$ b) 2 c) 4 d) $1/4$
31. In step-up transformer, relation between number of turns in primary (N_p) and number of turns in secondary (N_s) coils is
 a) N_s is greater than N_p b) N_p is greater than N_s
 c) N_s is equal to N_p d) $N_p = 2N_s$
32. In a purely resistive ac circuit, the current
 a) Lags behind the e.m.f. in phase
 b) Is in phase with the e.m.f.
 c) Leads the e.m.f. in phase
 d) Leads the e.m.f. in half the cycle and lags behind it in the other half
33. In a LCR circuit having $L = 8.0 \text{ henry}$, $C = 0.5 \mu\text{F}$ and $R = 100 \text{ ohm}$ in series. The resonance frequency in per second is
 a) 700 radian b) 600 Hz
 c) 500 radian d) 500 Hz
34. The rms value of the electric field of the light coming from the sun is 720 NC^{-1} . The average total energy density of the Electromagnetic Wave is
 a) $4.58 \times 10^{-6} \text{ Jm}^{-3}$ b) $6.37 \times 10^{-9} \text{ Jm}^{-3}$
 c) $81.35 \times 10^{-12} \text{ Jm}^{-3}$ d) $3.3 \times 10^{-3} \text{ Jm}^{-3}$
35. The spectrum of light emitted by a glowing solid is
 a) Continuous spectrum b) Line spectrum
 c) Band spectrum d) Absorption spectrum
36. The minimum temperature of a body at which it emits light is
 a) 1200°C b) 1000°C c) 500°C d) 200°C
37. The wavelength of the light used in Young's double slit experiment is λ . The intensity at a point on the screen is I , where the path difference is $\frac{\lambda}{6}$. If I_0 denotes the maximum intensity, then the ratio of I and I_0 is
 a) 0.866 b) 0.5 c) 0.707 d) 0.75
38. K_α and K_β X-rays are emitted when there is a transition of electron between the levels
 a) $n=2$ to $n=1$ and $n=3$ to $n=1$ respectively
 b) $n=2$ to $n=1$ and $n=3$ to $n=2$ respectively
 c) $n=3$ to $n=2$ and $n=4$ to $n=2$ respectively
 d) $n=3$ to $n=2$ and $n=4$ to $n=3$ respectively
39. In the photoelectric effect the velocity of ejected electrons depends upon the nature of the target and
 a) The frequency of the incident light
 b) The polarisation of the incident light
 c) The time for which the light has been incident
 d) The intensity of the incident light
40. When hydrogen atom is in its first excited level, its radius is how many times its ground state radius?
 a) Half b) Same

- c) Twice d) Four times
41. The mass defect in a particular nuclear reaction is 0.3 *grams*. The amount of energy liberated in kilowatt hours is (Velocity of light = $3 \times 10^8 \text{ m/s}$)
 a) 1.5×10^6 b) 2.5×10^6 c) 3×10^6 d) 7.5×10^6
42. ${}_{92}^{235}\text{X} \rightarrow {}_{91}^{231}\text{Y}$
 Number of particles emitted in the reaction is
 a) One electron and one neutron
 b) One neutron and one electron
 c) One α and one neutron
 d) One α and one electron
43. The maximum efficiency of full wave rectifier is
 a) 100 % b) 25.20 % c) 40.6 % d) 81.2 %
44. In satellite communication
 1. The frequency used lies between 5 MHz and 10 MHz
 2. The uplink and downlink frequencies are different.
 3. The orbit of geostationary satellite lies in the equatorial plane at an inclination of 0° .
 In the above statements
 a) Only 2 and 3 are true b) All are true
 c) Only 2 is true d) Only 1 and 2 are true
45. With reference to ionospheric propagation, an electromagnetic wave with a critical frequency of 15 MHz and incident at an angle of 45° will have MUF of
 a) 15 MHz b) $15/\sqrt{2}$ MHz
 c) $15\sqrt{2}$ MHz d) None of these
46. Stoichiometric ratio of sodium dihydrogen orthophosphate and sodium hydrogen orthophosphate required for synthesis of $\text{Na}_5\text{P}_3\text{O}_{11}$ is
 a) 1.5 : 3 b) 3 : 1.5 c) 1 : 1 d) 2 : 3
47. Mixture X = 0.02 mole of $[\text{Co}(\text{NH}_3)_5\text{SO}_4]\text{Br}$ and 0.02 mole of $[\text{Co}(\text{NH}_3)_5\text{Br}]\text{SO}_4$ was prepared in 2 L of solution.
 1 L of mixture X + excess $\text{AgNO}_3 \rightarrow \text{Y}$
 1 L of mixture X + excess $\text{BaCl}_2 \rightarrow \text{Z}$
 Number of moles of Y and Z are
 a) 0.01, 0.01 b) 0.02, 0.01
 c) 0.01, 0.02 d) 0.02, 0.02
48. Einstein's photoelectric equation states that $E_k = h\nu - W$
 Here, E_k refers to
 a) Kinetic energy of all ejected electrons
 b) Mean kinetic energy of emitted electrons
 c) Minimum kinetic energy of emitted electrons
 d) Maximum kinetic energy of emitted electrons
49. If the quantum number for the 5th electron in carbon atoms are 2,1,1,+1/2, then for the 6th electron, these values would be
 a) 2, 1, 0, $-\frac{1}{2}$ b) 2, 0, 1, $+\frac{1}{2}$
 c) 2, 1, 1, $-\frac{1}{2}$ d) 2, 1, -1, $+\frac{1}{2}$
50. The correct order of ionisation energy of C, N, O, F is
 a) $\text{F} < \text{O} < \text{N} < \text{C}$ b) $\text{F} < \text{N} < \text{C} < \text{O}$
 c) $\text{C} < \text{N} < \text{O} < \text{F}$ d) $\text{C} < \text{O} < \text{N} < \text{F}$
51. Which of the following compound is covalent?
 a) H_2 b) KCl c) Na_2S d) CaO
52. Hybridisation of central atom in NF_3 is
 a) sp^3 b) sp c) sp^2 d) dsp^2
53. A preweighted vessel was filled with CO_2 at STP and weighed. It was then evacuated, filled with SO_2 at the same temperature and pressure and again weighed. The weight of the CO_2 will be
 a) The same as that of the SO_2
 b) Twice of that of the SO_2
 c) Half that of the SO_2
 d) Two third of that of SO_2
54. 1 mole of H_2SO_4 is mixed with 2 moles of NaOH . The heat evolved will be
 a) 57.3 kJ
 b) 2×57.3 kJ
 c) $57.3/2$ kJ
 d) Cannot be predicated
55. The decreasing order of bond dissociation energies of C – C, C – H and H – H bonds is
 a) $\text{H} - \text{H} > -\text{C} - \text{H} > -\text{C} - \text{C} -$
 b) $-\text{C} - \text{C} - > -\text{C} - \text{H} > \text{H} - \text{H}$
 c) $-\text{C} - \text{H} > -\text{C} - \text{C} - > \text{H} - \text{H}$
 d) $-\text{C} - \text{C} - > \text{H} - \text{H} > -\text{C} - \text{H}$
56. The indicator used in titration of oxalic acid with caustic soda solution is
 a) Methyl orange b) Methyl red
 c) Fluorescein d) Phenolphthalein
57. Arrange the following as increase in oxidation number
 (i) Mn^{2+} (ii) MnO_2
 (iii) KMnO_4 (iv) K_2MnO_4

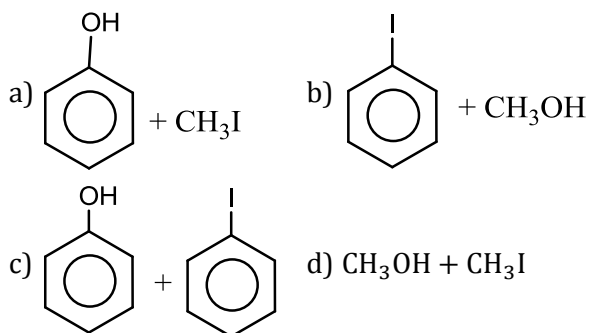
- a) (i)>(ii)>(iii)>(iv) b) (i)<(ii)<(iv)<(iii)
c) (ii)<(iii)<(i)<(iv) d) (iii)>(i)>(iv)>(ii)
58. Which one of the following reaction is possible at anode?
a) $F_2 + 2e^- \rightarrow 2F^-$
b) $2H^+ + \frac{1}{2}O_2 + 2e^- \rightarrow H_2O$
c) $2Cr^{3+} + 7H_2O \rightarrow Cr_2O_7^{2-} + 14H^+ + 6e^-$
d) $Fe^{2+} \rightarrow Fe^{3+} + e^-$
59. Which one of the following is a true peroxide?
a) SO_2 b) MnO_2 c) NO_2 d) BaO_2
60. When Na reacts with liquid NH_3 the following substance is formed
a) $Na(NH_3)_x]^-$ b) $[e(NH_3)_y]^-$
c) $NaNH_2$ d) $Na_x(NH_3)_y$
61. Which of the following form dimeric halides?
a) Al b) Mg c) In d) Ca
62. Which is used to produce smoke screens?
a) Calcium phosphide b) Sodium carbonate
c) Zinc sulphide d) Zinc phosphide
63. The correct order of increasing basicity of the given conjugate bases ($R=CH_3$) is
a) $RCO\bar{O} < HC \equiv \bar{C} < \bar{R} < \bar{NH}_2$
b) $\bar{R} < HC \equiv \bar{C} < RCO\bar{O} < \bar{NH}_2$
c) $RCO\bar{O} < NH_2 < HC \equiv \bar{C} < \bar{R}$
d) $RCO\bar{O} < HC \equiv \bar{C} < \bar{NH}_2 < \bar{R}$
64. Propylene on hydrolysis with sulphuric acid forms
a) *n*-propyl alcohol b) Isopropyl alcohol
c) Ethyl alcohol d) Butyl alcohol
65. Which of the following will give three mono-bromo derivatives?
a) $CH_3CH_2CH_2CH(CH_3)CH_3$
b) $CH_3CH_2C(CH_3)_2CH_3$
c) $CH_3CH_3(CH_3)CH(CH_3)CH_3$
d) All the above can give
66. Green house effect is caused by
a) NO_2 b) CO c) NO d) CO_2
67. A solid is made of two elements X and Z. The atoms Z are in ccp arrangement while the atom X occupy all the tetrahedral sites. What is the formula of the compound?
a) XZ b) XZ_2 c) X_2Z d) X_2Z_3
68. The packing efficiency of the two dimensional square unit cell shown below is



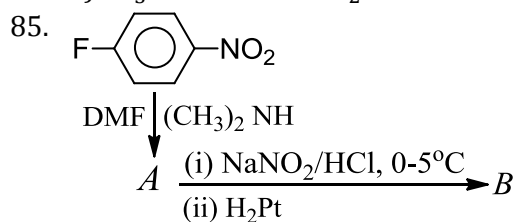
- a) 39.27% b) 68.02% c) 74.05% d) 78.54%

69. The vapour pressure of a pure liquid A is 40 mm Hg at 310 K. The vapour pressure of this liquid in a solution with liquid B is 32 mm Hg. What is the mole fraction of A in the solution if it obeys the Raoult's law?
a) 0.5 b) 0.6 c) 0.7 d) 0.8
70. 0.004 M Na_2SO_4 is isotonic with 0.01 M glucose. Degree of dissociation of Na_2SO_4 is
a) 75% b) 50% c) 25% d) 85%
71. The reduction potential of hydrogen half-cell will negative if
a) $p(H_2) = 1$ atm and $[H^+] = 2.0$ M
b) $p(H_2) = 1$ atm and $[H^+] = 1.0$ M
c) $p(H_2) = 2$ atm and $[H^+] = 1.0$ M
d) $p(H_2) = 2$ atm and $[H^+] = 2.0$ M
72. For the reaction, $H_2 + I_2 \rightarrow 2HI$, the differential rate law is
a) $-\frac{d[H_2]}{dt} = -\frac{d[I_2]}{dt} = \frac{1}{2} \frac{d[HI]}{dt}$
b) $-\frac{d[H_2]}{dt} = -2 \frac{d[I_2]}{dt} = \frac{1}{2} \frac{d[HI]}{dt}$
c) $-\frac{d[H_2]}{dt} = -\frac{d[I_2]}{dt} = \frac{d[HI]}{dt}$
d) $-\frac{d[H_2]}{dt} = -\frac{d[I_2]}{dt} = -\frac{d[HI]}{dt}$
73. A drop of a solution (volume = 0.05 mL) contains 6×10^{-7} mol of H^+ . If the rate of disappearance of H^+ is 6.0×10^5 mol/L \times s, how long will it take for H^+ to disappear from the drop
a) 8.0 b) 2.0 c) 6.0 d) 2.0
 $\times 10^{-8}$ s $\times 10^{-8}$ s $\times 10^{-6}$ s $\times 10^{-2}$ s
74. The sky looks blue due to
a) Dispersion effect b) Reflection effect
c) Transmission effect d) Scattering effect
75. Bronze is a mixture of
a) Pb+Sn b) Cu+Sn
c) Cu+Zn d) Pb+Zn
76. Which of the following is a carbonate ore?
a) Pyrolusite b) Diaspore
c) Cassiterite d) Malachite
77. Ozone is used for purifying water because
a) It dissociates and release oxygen
b) Do not leave any foul smell like chlorine.
c) Kills bacteria, cyst, fungi and acts as a biocide.
d) All of the above
78. By annealing, steel
a) Becomes soft
b) Becomes liquid
c) Becomes hard and brittle

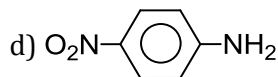
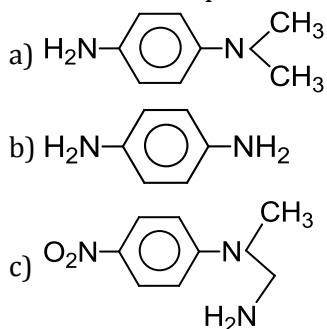
- d) Is covered with a thin film of Fe_3O_4
79. Which of the following compounds volatilises on heating?
a) MgCl_2 b) HgCl_2 c) CaCl_2 d) FeCl_3
80. An alkane forms isomers if minimum number of C-atom is:
a) 1 b) 2 c) 3 d) 4
81. Reaction of *t*-butyl bromide with sodium methoxide produces
a) Isobutane b) Isobutylene
c) Sodium *t*-butoxide d) *t*-butylmethyl ether
82. The products obtained when anisole is heated in a sealed tube with HI are



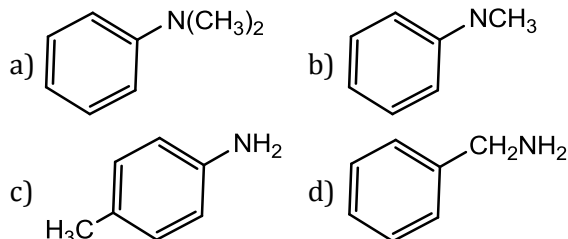
83. Catalytic dehydrogenation of a primary alcohol gives a
a) Secondary alcohol b) Aldehyde
c) Ketone d) Ester
84. An organic compound of molecular formula $\text{C}_3\text{H}_6\text{O}$ did not give a silver mirror with Tollen's reagent, but gave an oxime with hydroxylamine, it may be
a) $\text{CH}_3 - \text{CO} - \text{CH}_3$
b) $\text{C}_2\text{H}_5\text{CHO}$
c) $\text{CH}_2 = \text{CH} - \text{CH}_2 - \text{OH}$
d) $\text{CH}_3 - \text{O} - \text{CH} = \text{CH}_2$



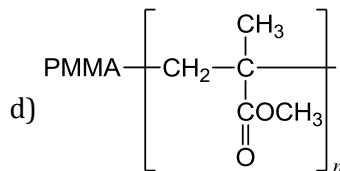
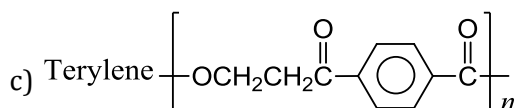
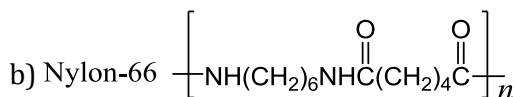
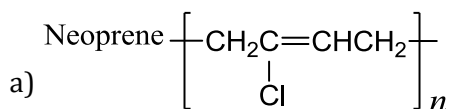
In the above sequence B is



86. Amongst the compound given, the one that would form a brilliant coloured dye on treatment with NaNO_2 in dil. HCl followed by addition to an alkaline solution of β -naphthol is

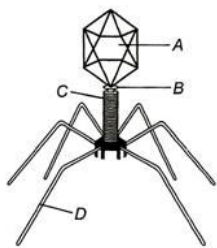


87. Which one is involved in the formation of nicotinamide and indole-3-acetic acid?
a) Lysine b) Tryptophan
c) Tyrosine d) Glutamic acid
88. The polymer obtained by condensation of sebacic acid and hexamethylenediamine is named as
a) Nylon-6 b) Nylon-6-nylon-10
c) Nylon-6,6 d) Nylon-6,10
89. Which one of the following is not correctly matched?



90. Aspirin is an acetylation product of
a) *o*-hydroxybenzoic acid
b) *o*-hydroxybenzene
c) *m*-hydroxybenzoic acid
d) *p*-dihydroxybenzene
91. Which one of the following taxonomic categories can categorized rest all others
a) Family
b) Genus

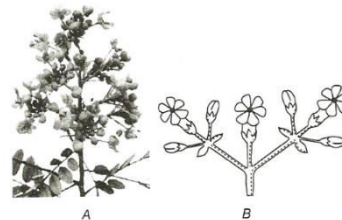
- c) Class
d) order
92. What is the prime source of taxonomic studies?
a) Collection of actual specimens of organisms species
b) Identification of actual specimen of organism species
c) Both (a) and (b)
d) None of the above
93. Two plants can be conclusively said to belong to the same species if they
a) Can reproduce freely with each other and form seeds
b) Have more than 90 percent similar genes
c) Look similar and possess identical secondary metabolites
d) Have same number of chromosomes.
94. Identify the label A, B, C and D in the following figures



Codes

- a) A-Head, B-collar, C-Sheath, D-Tail fibres
b) A-Collar, B-Head, C-Sheath, D-Tail fibres
c) A-Head, B-Collar, C-Tail fibres, D-Sheath
d) A-Collar, B-Tail fibres, C-Head, D-Sheath
95. The association mycorrhiza is
a) Relationship of algae and fungi
b) Relationship of fungi and higher plants
c) Relationship of algae and higher plants
d) None of these
96. Characters of both conifers and cycads are found in
a) *Ginkgo*
b) *Ephedra*
c) *Cupressus*
d) *Tsuga*
97. Which region is responsible for origin of rhizoids in *Funaria*?
a) Lateral region
b) Dorsal region
c) Ventral region
d) Basal region
98. True segmentation is also called
a) Metagenesis
b) Metamorphosis
c) Metamerism
d) Metasegmerism
99. The secondary host of *Taenia saginata* is

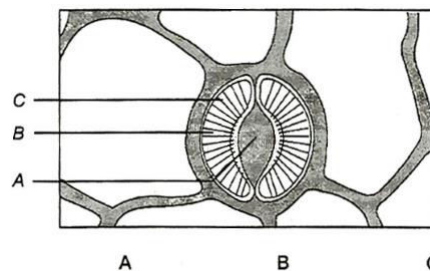
- a) Cow
b) Pig
c) Dog
d) None of these
100. Which of the following groups includes only arthropods?
a) Prawn, *Schistosoma*, *Planaria*
b) Cockroach, scorpion, prawn
c) *Chiton*, *Neopilina*, scorpion
d) *Chiton*, prawn, cockroach
101. Arrange the following plants in the ascending order based on the number of carpels they possess
I. *Oenothera*
II. *Acacia melanoxylon*
III. Squill
IV. Lettuce
a) IV, III, I, II
b) II, IV, III, I
c) II, III, IV, I
d) I, IV, III, II
102. Identify the type of inflorescence in the given diagrams (A and B)



- a) A-Racemose; B-Cymose
b) A-Cymose; B-Racemose
c) A-Cymose; B-Cymose
d) A-Racemose; B-Racemose
103. The difference in phloem of gymnosperms and angiosperms is due to
a) Parenchyma
b) Sieve cell
c) Companion cell
d) Fibres
104. Leaf
a) Is a lateral
b) Is a general
c) Is a flattened
d) Is a structural
e) Is a born
f) Is a on the stem
g) Is a vegetative
h) Is a for photosynthesis
i) Is a meristem
j) Is a shoot apical
k) Is a meristem
l) Is a meristem
m) Is a meristem
n) Is a meristem
o) Is a meristem
p) Is a meristem
q) Is a meristem
r) Is a meristem
s) Is a meristem
t) Is a meristem
u) Is a meristem
v) Is a meristem
w) Is a meristem
x) Is a meristem
y) Is a meristem
z) Is a meristem
aa) Is a meristem
ab) Is a meristem
ac) Is a meristem
ad) Is a meristem
ae) Is a meristem
af) Is a meristem
ag) Is a meristem
ah) Is a meristem
ai) Is a meristem
aj) Is a meristem
ak) Is a meristem
al) Is a meristem
am) Is a meristem
an) Is a meristem
ao) Is a meristem
ap) Is a meristem
aq) Is a meristem
ar) Is a meristem
as) Is a meristem
at) Is a meristem
au) Is a meristem
av) Is a meristem
aw) Is a meristem
ax) Is a meristem
ay) Is a meristem
az) Is a meristem
ba) Is a meristem
bb) Is a meristem
bc) Is a meristem
bd) Is a meristem
be) Is a meristem
bf) Is a meristem
bg) Is a meristem
bh) Is a meristem
bi) Is a meristem
bj) Is a meristem
bk) Is a meristem
bl) Is a meristem
bm) Is a meristem
bn) Is a meristem
bo) Is a meristem
bp) Is a meristem
bq) Is a meristem
br) Is a meristem
bs) Is a meristem
bt) Is a meristem
bu) Is a meristem
bv) Is a meristem
bw) Is a meristem
bx) Is a meristem
by) Is a meristem
bz) Is a meristem
ca) Is a meristem
cb) Is a meristem
cc) Is a meristem
cd) Is a meristem
ce) Is a meristem
cf) Is a meristem
cg) Is a meristem
ch) Is a meristem
ci) Is a meristem
cj) Is a meristem
ck) Is a meristem
cl) Is a meristem
cm) Is a meristem
cn) Is a meristem
co) Is a meristem
cp) Is a meristem
cq) Is a meristem
cr) Is a meristem
cs) Is a meristem
ct) Is a meristem
cu) Is a meristem
cv) Is a meristem
cw) Is a meristem
cx) Is a meristem
cy) Is a meristem
cz) Is a meristem
da) Is a meristem
db) Is a meristem
dc) Is a meristem
dd) Is a meristem
de) Is a meristem
df) Is a meristem
dg) Is a meristem
dh) Is a meristem
di) Is a meristem
dj) Is a meristem
dk) Is a meristem
dl) Is a meristem
dm) Is a meristem
dn) Is a meristem
do) Is a meristem
dp) Is a meristem
dq) Is a meristem
dr) Is a meristem
ds) Is a meristem
dt) Is a meristem
du) Is a meristem
dv) Is a meristem
dw) Is a meristem
dx) Is a meristem
dy) Is a meristem
dz) Is a meristem
ea) Is a meristem
eb) Is a meristem
ec) Is a meristem
ed) Is a meristem
ee) Is a meristem
ef) Is a meristem
eg) Is a meristem
eh) Is a meristem
ei) Is a meristem
ej) Is a meristem
ek) Is a meristem
el) Is a meristem
em) Is a meristem
en) Is a meristem
eo) Is a meristem
ep) Is a meristem
eq) Is a meristem
er) Is a meristem
es) Is a meristem
et) Is a meristem
eu) Is a meristem
ev) Is a meristem
ew) Is a meristem
ex) Is a meristem
ey) Is a meristem
ez) Is a meristem
fa) Is a meristem
fb) Is a meristem
fc) Is a meristem
fd) Is a meristem
fe) Is a meristem
ff) Is a meristem
fg) Is a meristem
fh) Is a meristem
fi) Is a meristem
fj) Is a meristem
fk) Is a meristem
fl) Is a meristem
fm) Is a meristem
fn) Is a meristem
fo) Is a meristem
fp) Is a meristem
fq) Is a meristem
fr) Is a meristem
fs) Is a meristem
ft) Is a meristem
fu) Is a meristem
fv) Is a meristem
fw) Is a meristem
fx) Is a meristem
fy) Is a meristem
fz) Is a meristem
ga) Is a meristem
gb) Is a meristem
gc) Is a meristem
gd) Is a meristem
ge) Is a meristem
gf) Is a meristem
gg) Is a meristem
gh) Is a meristem
gi) Is a meristem
gj) Is a meristem
gk) Is a meristem
gl) Is a meristem
gm) Is a meristem
gn) Is a meristem
go) Is a meristem
gp) Is a meristem
gq) Is a meristem
gr) Is a meristem
gs) Is a meristem
gt) Is a meristem
gu) Is a meristem
gv) Is a meristem
gw) Is a meristem
gx) Is a meristem
gy) Is a meristem
gz) Is a meristem
ha) Is a meristem
hb) Is a meristem
hc) Is a meristem
hd) Is a meristem
he) Is a meristem
hf) Is a meristem
hg) Is a meristem
hh) Is a meristem
hi) Is a meristem
hj) Is a meristem
hk) Is a meristem
hl) Is a meristem
hm) Is a meristem
hn) Is a meristem
ho) Is a meristem
hp) Is a meristem
hq) Is a meristem
hr) Is a meristem
hs) Is a meristem
ht) Is a meristem
hu) Is a meristem
hv) Is a meristem
hw) Is a meristem
hx) Is a meristem
hy) Is a meristem
hz) Is a meristem
ia) Is a meristem
ib) Is a meristem
ic) Is a meristem
id) Is a meristem
ie) Is a meristem
if) Is a meristem
ig) Is a meristem
ih) Is a meristem
ii) Is a meristem
ij) Is a meristem
ik) Is a meristem
il) Is a meristem
im) Is a meristem
in) Is a meristem
io) Is a meristem
ip) Is a meristem
iq) Is a meristem
ir) Is a meristem
is) Is a meristem
it) Is a meristem
iu) Is a meristem
iv) Is a meristem
iw) Is a meristem
ix) Is a meristem
iy) Is a meristem
iz) Is a meristem
ja) Is a meristem
jb) Is a meristem
jc) Is a meristem
jd) Is a meristem
je) Is a meristem
jf) Is a meristem
jg) Is a meristem
jh) Is a meristem
ji) Is a meristem
jj) Is a meristem
jk) Is a meristem
jl) Is a meristem
jm) Is a meristem
jn) Is a meristem
jo) Is a meristem
jp) Is a meristem
jq) Is a meristem
jr) Is a meristem
js) Is a meristem
jt) Is a meristem
ju) Is a meristem
jv) Is a meristem
jw) Is a meristem
jx) Is a meristem
jy) Is a meristem
jz) Is a meristem
ka) Is a meristem
kb) Is a meristem
kc) Is a meristem
kd) Is a meristem
ke) Is a meristem
kf) Is a meristem
kg) Is a meristem
kh) Is a meristem
ki) Is a meristem
kj) Is a meristem
kk) Is a meristem
kl) Is a meristem
km) Is a meristem
kn) Is a meristem
ko) Is a meristem
kp) Is a meristem
kq) Is a meristem
kr) Is a meristem
ks) Is a meristem
kt) Is a meristem
ku) Is a meristem
kv) Is a meristem
kw) Is a meristem
kx) Is a meristem
ky) Is a meristem
kz) Is a meristem
la) Is a meristem
lb) Is a meristem
lc) Is a meristem
ld) Is a meristem
le) Is a meristem
lf) Is a meristem
lg) Is a meristem
lh) Is a meristem
li) Is a meristem
lj) Is a meristem
lk) Is a meristem
ll) Is a meristem
lm) Is a meristem
ln) Is a meristem
lo) Is a meristem
lp) Is a meristem
lq) Is a meristem
lr) Is a meristem
ls) Is a meristem
lt) Is a meristem
lu) Is a meristem
lv) Is a meristem
lw) Is a meristem
lx) Is a meristem
ly) Is a meristem
lz) Is a meristem
ma) Is a meristem
mb) Is a meristem
mc) Is a meristem
md) Is a meristem
me) Is a meristem
mf) Is a meristem
mg) Is a meristem
mh) Is a meristem
mi) Is a meristem
mj) Is a meristem
mk) Is a meristem
ml) Is a meristem
mn) Is a meristem
mo) Is a meristem
mp) Is a meristem
mq) Is a meristem
mr) Is a meristem
ms) Is a meristem
mt) Is a meristem
mu) Is a meristem
mv) Is a meristem
mw) Is a meristem
mx) Is a meristem
my) Is a meristem
mz) Is a meristem
na) Is a meristem
nb) Is a meristem
nc) Is a meristem
nd) Is a meristem
ne) Is a meristem
nf) Is a meristem
ng) Is a meristem
nh) Is a meristem
ni) Is a meristem
nj) Is a meristem
nk) Is a meristem
nl) Is a meristem
nm) Is a meristem
nn) Is a meristem
no) Is a meristem
np) Is a meristem
nq) Is a meristem
nr) Is a meristem
ns) Is a meristem
nt) Is a meristem
nu) Is a meristem
nv) Is a meristem
nw) Is a meristem
nx) Is a meristem
ny) Is a meristem
nz) Is a meristem
oa) Is a meristem
ob) Is a meristem
oc) Is a meristem
od) Is a meristem
oe) Is a meristem
of) Is a meristem
og) Is a meristem
oh) Is a meristem
oi) Is a meristem
oj) Is a meristem
ok) Is a meristem
ol) Is a meristem
om) Is a meristem
on) Is a meristem
oo) Is a meristem
op) Is a meristem
oq) Is a meristem
or) Is a meristem
os) Is a meristem
ot) Is a meristem
ou) Is a meristem
ov) Is a meristem
ow) Is a meristem
ox) Is a meristem
oy) Is a meristem
oz) Is a meristem
pa) Is a meristem
pb) Is a meristem
pc) Is a meristem
pd) Is a meristem
pe) Is a meristem
pf) Is a meristem
pg) Is a meristem
ph) Is a meristem
pi) Is a meristem
pj) Is a meristem
pk) Is a meristem
pl) Is a meristem
pm) Is a meristem
pn) Is a meristem
po) Is a meristem
pp) Is a meristem
pq) Is a meristem
pr) Is a meristem
ps) Is a meristem
pt) Is a meristem
pu) Is a meristem
pv) Is a meristem
pw) Is a meristem
px) Is a meristem
py) Is a meristem
pz) Is a meristem
qa) Is a meristem
qb) Is a meristem
qc) Is a meristem
qd) Is a meristem
qe) Is a meristem
qf) Is a meristem
qg) Is a meristem
qh) Is a meristem
qi) Is a meristem
qj) Is a meristem
qk) Is a meristem
ql) Is a meristem
qm) Is a meristem
qn) Is a meristem
qo) Is a meristem
qp) Is a meristem
qq) Is a meristem
qr) Is a meristem
qs) Is a meristem
qt) Is a meristem
qu) Is a meristem
qv) Is a meristem
qw) Is a meristem
qx) Is a meristem
qy) Is a meristem
qz) Is a meristem
ra) Is a meristem
rb) Is a meristem
rc) Is a meristem
rd) Is a meristem
re) Is a meristem
rf) Is a meristem
rg) Is a meristem
rh) Is a meristem
ri) Is a meristem
rj) Is a meristem
rk) Is a meristem
rl) Is a meristem
rm) Is a meristem
rn) Is a meristem
ro) Is a meristem
rp) Is a meristem
rq) Is a meristem
rr) Is a meristem
rs) Is a meristem
rt) Is a meristem
ru) Is a meristem
rv) Is a meristem
rw) Is a meristem
rx) Is a meristem
ry) Is a meristem
rz) Is a meristem
sa) Is a meristem
sb) Is a meristem
sc) Is a meristem
sd) Is a meristem
se) Is a meristem
sf) Is a meristem
sg) Is a meristem
sh) Is a meristem
si) Is a meristem
sj) Is a meristem
sk) Is a meristem
sl) Is a meristem
sm) Is a meristem
sn) Is a meristem
so) Is a meristem
sp) Is a meristem
sq) Is a meristem
sr) Is a meristem
ss) Is a meristem
st) Is a meristem
su) Is a meristem
sv) Is a meristem
sw) Is a meristem
sx) Is a meristem
sy) Is a meristem
sz) Is a meristem
ta) Is a meristem
tb) Is a meristem
tc) Is a meristem
td) Is a meristem
te) Is a meristem
tf) Is a meristem
tg) Is a meristem
th) Is a meristem
ti) Is a meristem
tj) Is a meristem
tk) Is a meristem
tl) Is a meristem
tm) Is a meristem
tn) Is a meristem
to) Is a meristem
tp) Is a meristem
tq) Is a meristem
tr) Is a meristem
ts) Is a meristem
tt) Is a meristem
tu) Is a meristem
tv) Is a meristem
tw) Is a meristem
tx) Is a meristem
ty) Is a meristem
tz) Is a meristem
ua) Is a meristem
ub) Is a meristem
uc) Is a meristem
ud) Is a meristem
ue) Is a meristem
uf) Is a meristem
ug) Is a meristem
uh) Is a meristem
ui) Is a meristem
uj) Is a meristem
uk) Is a meristem
ul) Is a meristem
um) Is a meristem
un) Is a meristem
uo) Is a meristem
up) Is a meristem
uq) Is a meristem
ur) Is a meristem
us) Is a meristem
ut) Is a meristem
uu) Is a meristem
uv) Is a meristem
uw) Is a meristem
ux) Is a meristem
uy) Is a meristem
uz) Is a meristem
va) Is a meristem
vb) Is a meristem
vc) Is a meristem
vd) Is a meristem
ve) Is a meristem
vf) Is a meristem
vg) Is a meristem
vh) Is a meristem
vi) Is a meristem
vj) Is a meristem
vk) Is a meristem
vl) Is a meristem
vm) Is a meristem
vn) Is a meristem
vo) Is a meristem
vp) Is a meristem
vq) Is a meristem
vr) Is a meristem
vs) Is a meristem
vt) Is a meristem
vu) Is a meristem
vv) Is a meristem
vw) Is a meristem
vx) Is a meristem
vy) Is a meristem
vz) Is a meristem
wa) Is a meristem
wb) Is a meristem
wc) Is a meristem
wd) Is a meristem
we) Is a meristem
wf) Is a meristem
wg) Is a meristem
wh) Is a meristem
wi) Is a meristem
wj) Is a meristem
wk) Is a meristem
wl) Is a meristem
wm) Is a meristem
wn) Is a meristem
wo) Is a meristem
wp) Is a meristem
wq) Is a meristem
wr) Is a meristem
ws) Is a meristem
wt) Is a meristem
wu) Is a meristem
wv) Is a meristem
ww) Is a meristem
wx) Is a meristem
wy) Is a meristem
wz) Is a meristem
xa) Is a meristem
xb) Is a meristem
xc) Is a meristem
xd) Is a meristem
xe) Is a meristem
xf) Is a meristem
xg) Is a meristem
xh) Is a meristem
xi) Is a meristem
xj) Is a meristem
xk) Is a meristem
xl) Is a meristem
xm) Is a meristem
xn) Is a meristem
xo) Is a meristem
xp) Is a meristem
xq) Is a meristem
xr) Is a meristem
xs) Is a meristem
xt) Is a meristem
xu) Is a meristem
xv) Is a meristem
xw) Is a meristem
xx) Is a meristem
xy) Is a meristem
xz) Is a meristem
ya) Is a meristem
yb) Is a meristem
yc) Is a meristem
yd) Is a meristem
ye) Is a meristem
yf) Is a meristem
yg) Is a meristem
yh) Is a meristem
yi) Is a meristem
yj) Is a meristem
yk) Is a meristem
yl) Is a meristem
ym) Is a meristem
yn) Is a meristem
yo) Is a meristem
yp) Is a meristem
yq) Is a meristem
yr) Is a meristem
ys) Is a meristem
yt) Is a meristem
yu) Is a meristem
yv) Is a meristem
yw) Is a meristem
yx) Is a meristem
yy) Is a meristem
yz) Is a meristem
za) Is a meristem
zb) Is a meristem
zc) Is a meristem
zd) Is a meristem
ze) Is a meristem
zf) Is a meristem
zg) Is a meristem
zh) Is a meristem
zi) Is a meristem
zj) Is a meristem
zk) Is a meristem
zl) Is a meristem
zm) Is a meristem
zn) Is a meristem
zo) Is a meristem
zp) Is a meristem
zq) Is a meristem
zr) Is a meristem
zs) Is a meristem
zt) Is a meristem
zu) Is a meristem
zv) Is a meristem
zw) Is a meristem
zx) Is a meristem
zy) Is a meristem
zz) Is a meristem

gymnosperm

107. The number of vasa efferentia that arises from testes in frog's male reproductive system is
a) 9 – 12 b) 10 – 12 c) 13 – 16 d) 16 – 19
108. Excretory system of the frog consists of
a) Pair of kidneys, ureters, urinary bladder, cloaca b) Single kidney, urinary bladder and cloaca
c) Kidney, and cloaca only d) Urethra and cloaca only
109. In DNA of certain organisms, guanine constitutes 20% of the bases. What percentage of the bases would be adenine?
a) 0% b) 10% c) 20% d) 30%
110. Wall of eukaryotic cell (fungus) is made up of a polymer of
a) α , 1-4 acetyl glucosamine b) β , 1-4 acetyl glucosamine
c) α , β , 1-4 acetyl glucosamine d) Acetyl glucosamine
111. Fluidity of bio-membranes can be shown by
a) Electron microscope
b) Tissue culture
c) Phase-contrast microscope
d) Fluorescence microscope
112. Catabolic and anabolic pathways are often coupled in cell. Why?
a) Both the path are the same energy
b) The free energy released from are pathway is used to drive other
c) The intermediate of a catabolic pathway are used in the anabolic pathway
d) Their enzymes are controlled by their activators and inhibitors
113. During cell cycle, RNA and non-histone proteins are synthesized in
a) S-phase b) G_0 -phase
c) G_1 -phase d) M-phase
114. In which of the following stage of the cell cycle, the attachment of spindle fibres to kinetochores of chromosomes occurs?
a) Prophase
b) Metaphase
c) Anaphase
d) Telophase
115. Choose the correct option to label A-C in the given diagram of stomatal apparatus



- | A | B | C |
|----------------------|----------------------|------------|
| a) Stomatal aperture | b) Cellulose micro | |
| Subsidiary | fibrils | Subsidiary |
| Guard cells | cells | Stomatal |
| | | aperture |
| c) Stomatal aperture | d) Stomatal aperture | |
| Guard cell | Guard cell | |
| Epidermal cells | Cellulosic micro | |
| | fibrils | |
116. Which of the following theories for ascent of sap was proposed by an eminent Indian scientist J C Bose?
a) Pulsation theory
b) Relay pump theory
c) Transpiration pull theory
d) Root pressure theory
117. Imbibition is always accompanied by swelling or increase in the volume of imbibint However, the increase in the volume of the imbibant is
a) More than the volume of water imbibed
b) Same as the volume of the water imbibed
c) Less than the volume of the water imbibed
d) Depends upon the type of imbibant
118. What is the correct order of nitrogen assimilation?
a) $N_2 \rightarrow NO_2 \rightarrow NO_3 \rightarrow NH_2OH \rightarrow NH_3$
b) $N_2 \rightarrow NO_3 \rightarrow NO_2 \rightarrow NH_2OH \rightarrow NH_3$
c) $N_2 \rightarrow NO_2 \rightarrow NO_3 \rightarrow NH_3 \rightarrow NH_2OH$
d) $N_2 \rightarrow NO_3 \rightarrow NO_2 \rightarrow NH_3 \rightarrow NH_2OH$
119. 'Khaira disease of rice' is due to
a) Fungus b) Bacteria
c) Zn deficiency d) Mo deficiency
120. C_4 -plant minimises the photorespiration because C_4 -plants
a) Use PEPcase to initiate CO_2 fixation
b) Do not carry out the Calvin cycle in low CO_2 level
c) Exclude Calvin cycle
d) Show photorespiration
121. Main biosynthetic pathway for CO_2 fixation in C_4 -plant is
a) C_4 pathway b) C_3 pathway

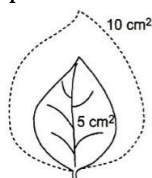
- c) C_2 pathway d) Both (a) and (b)
122. The reactions of Pentose Phosphate Pathway (PPP) take place in
- Mitochondrion
 - Cytoplasm
 - Chloroplast, peroxisome and mitochondrion
 - Chloroplast, glyoxysome and mitochondrion

123. Instantaneous source of energy is
- Protein
 - Lipid
 - Fats
 - Glucose

124. Which plant hormone is found in gaseous form?

- Auxin
- Cytokinin
- Ethylene
- ABA

125. In the given figure find out the absolute and relative growth rate and choose the correct option

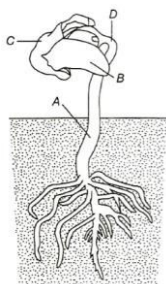


Time period 1 - day

Absolute Growth Rate Relative Growth Rate

- 1 cm^2 1 cm^2
- 100 cm^2 5 cm^2
- 5 cm^2 100 cm^2
- 0.5 cm^2 100 cm^2

126. Identify A, B, C and D from the given figure and choose the correct accordingly



- A-Hypocotyl, B-Cotyledons, C-Seed coat, D-Epicotyl
- A-Epicotyl, B-Cotyledons, C-Hypocotyl, D-Seed coat
- A-Epicotyl, B-Seed coat, C-Hypocotyl, D-Cotyledon
- A-Hypocotyl, B-Seed coat, C-Epicotyl, D-Cotyledon

127. Which of the following are required in minimum amount by human?
- Iron, iodine, carbon, manganese, copper, oxygen
 - Iron, iodine, manganese, copper, zinc, fluorine
 - Iron, iodine, manganese, zinc, hydrogen

- d) Nitrogen, oxygen, zinc, fluorine

128. Secretion of gastric juice is controlled by
- Gastrin
 - Cholecystokinin
 - Enterogastrin
 - None of these

129. Arrange the given steps by which the pulmonary volume increases in the sequence of events occurring first

- Contraction of intercostal muscles
- Lifting up of the ribs
- Sternum causing an increase in the volume of the thoracic chamber in dorsoventral axis
- Contraction of the diaphragm which increases the volume of the thoracic chamber in antero-posterior axis

Choose the correct option

- $I \rightarrow II \rightarrow III \rightarrow IV$
- $IV \rightarrow I \rightarrow II \rightarrow III$
- $IV \rightarrow I \rightarrow III \rightarrow II$
- $I \rightarrow III \rightarrow IV \rightarrow II$

130. Partial pressure of the gas is the pressure contributed by
- All gases in a mixture
 - Individual gas in a mixture
 - Pressure exerted by atmosphere on gases
 - Atmosphere on O_2 only

131. Platelets are
- Also called thrombocytes
 - Cell fragments
 - Produced from megakaryocytes
 - All of the above

132. In the ventricular diastole, the ...A... valve closes. This causes the second heart sound ...B... Choose the correct option for A and B
- A-Semilunar; B-Dub
 - A-Mitral; B-Dub
 - A-Bicuspid; B-Dub
 - A-Tricuspid; B-Dub

133. The process of release of urine is called

- Micturition
- Sweatening
- Defeciation
- Perspiring

134. All Bowman's capsules of the kidney are found in

- Pelvis
- Medulla
- Cortex
- None of these

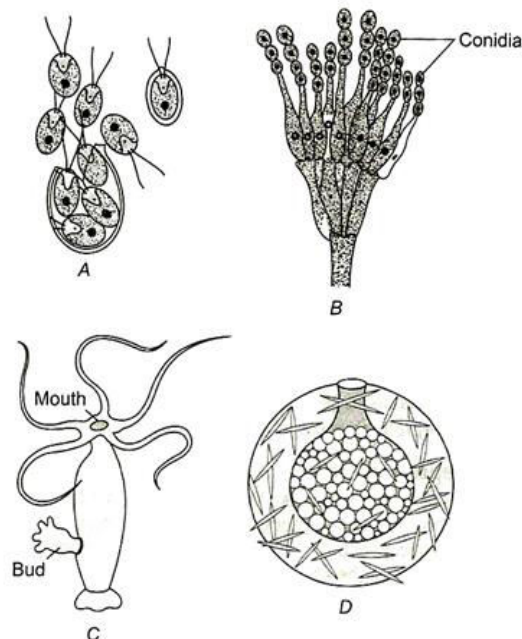
135. The principle nitrogenous excretory compound in humans is synthesized

- In kidneys, but eliminated mostly through liver
- In kidneys as well as eliminated by kidneys
- In liver and also eliminated by the same through bile
- In the liver, but eliminated mostly through kidneys

136. Myofilaments or myofibrils are

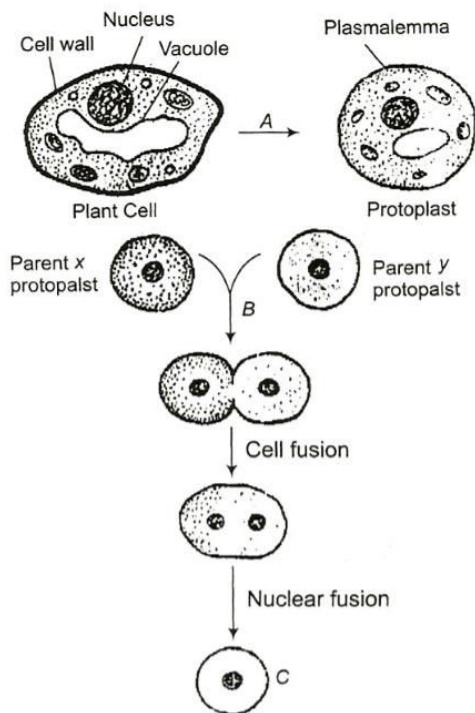
- Obliquely arranged filaments of muscle fibre

- b) Parallely arranged filaments of muscle fibre
 c) Horizontally arranged filaments of muscle fibre
 d) Radially arranged filaments of muscle fibre
137. Zygomatic arch of rabbit is formed of
 a) Maxilla, periotic and jugal
 b) Periotic, jugal and palatine
 c) Maxilla, squamosal and jugal
 d) Maxilla, premaxilla and squamosal
138. Ciliary movement occurs in most of our internal tubular organs which are lined by ...A epithelium. The coordinated movement of cilia in the ...B... help us in removing dust particles. Passage of ova through female reproductive tract is facilitated by the ...C... movement Identify A, B and C to complete the given NCERT statement
 a) A-squamous, B-trachea, C-ciliary
 b) A-cuboidal, B-trachea, C-ciliary
 c) A-ciliated B-trachea, C-amoeboid
 d) A-stratified, B-trachea, C-amoeboid
139. Which part of brain is associated with strong emotions?
 a) Limbic system b) Medulla
 c) Cerebellum d) Cerebral cortex
140. Our paired eyes are located in sockets of the skull called
 a) Orbits b) Cornea c) Iris d) Lens
141. Insulin and glucagon are transported to target organ by
 a) Lymph b) Blood
 c) Pancreatic duct d) Cystic duct
142. Significant role of calcium balance in the body is maintained by
 a) PTH and FSH b) PTH and TCT
 c) TCT and FSH d) TCT and GH
143. Identify the following diagram



- a. Zoospore in *Chlamydomonas*
 b. Conidia of *Penicillium*
 c. Buds in *Hydra*
 d. Gemmules in sponge
 All the above are
 a) Bodies involved in sexual reproduction
 b) Bodies involved in asexual reproduction
 c) Bodies of young ones
 d) All the above are correct
144. One of the followings is not the characteristic feature of cyanobacteria:
 a) They are multicellular
 b) They form colonies
 c) They form blooms in polluted water bodies
 d) They can fix atmospheric nitrogen
145. Non-endospermic seeds are seen in
 a) Groundnut b) Pea
 c) Beans d) All of these
146. Polar nuclei are located in
 a) Embryo sac b) Thalamus
 c) Pollen tube d) Ovule
147. Chalazal pole is present
 a) Opposite to micropyle b) At the origin of integuments
 c) Opposite to nucellus d) Near the embryo sac
148. Fluid filled cavity called ...A... is present in ...B... follicle called ...C.... Here A, B and C are
 a) A-secondary follicle, b) A- primary follicle, B-primary follicle, C- B-antrum, C- tertiary follicle secondary follicle
 c) A- tertiary follicle, B- d) A- antrum, B- secondary follicle, C- secondary follicle, C- antrum tertiary follicle
149. Skin epidermis, tooth, enamel, lens and corner of outer ear, brain, spinal cord, skeletal

- muscles of human head are derived from
- Ectoderm
 - Mesoderm
 - Endoderm
 - Both (c) and (d)
150. Select the correct statement.
- Cleavage follows gastrulation
 - Yolk content in egg has no role in cleavage
 - Cleavage is repeated mitotic division of zygote
 - Gastrulation and blastulation are followed by each other
151. Ageing is retarded by
- ABA
 - CKN
 - GA
 - C₂H₄
152. A woman who substitutes or takes the place of the real mother to nurse the embryo is called
- Interrogate mother
 - Surrogate mother
 - Both (a) and (b)
 - None of the above
153. Detection technique for AIDS is
- PCR
 - ELISA
 - Both (b) and (c)
 - Clinical culture
154. Genotypic and phenotypic ratios remains the same in
- Sex-linked genes
 - Pseudoallelic genes
 - Intermediate inheritance
 - Dominance and recessive genes
155. The alternate forms of a gene is called
- Recessive character
 - Dominant character
 - Alleles
 - Alternative gene
156. Inheritance of skin colour in human is an example of
- Chromosomal aberration
 - Codominance
 - Point mutation
 - Polygenic inheritance
157. How many types of nucleic acids are found in living system?
- One
 - Two
 - Three
 - Four
158. Twin studies in humans are useful because
- They allow more refined estimates of the chromosome location to be made
 - They allows an improved expression of genes
 - Cloning of genes is facilitated by the presence of an extra copy
 - They allows genetic *vs* environmental influences on variation in a trait to be estimated
159. Development of different functional structures from a common ancestral form is called
- Differential evolution
 - Adaptive radiation
 - Non-adaptive radiation
 - Regressive evolution
160. Theory of continuity of germplasm was given by
- August Weismann
 - Lamarck
 - Darwin
 - Wallace
161. Which of the following is correct for immuno-modulators?
- They always suppress immune system
 - They never suppress immune system
 - They always stimulate immune system
 - Specific immuno-modulators stimulate the immuno-response of immune system, whereas some other immuno-modulators inhibit it
162. Which of the following diseases is caused due to helminth infection?
- Ascariasis
 - Wuchereriasis
 - Both (a) and (b)
 - None of these
163. Regarding common cold consider the following statements
- Rhinovirus is responsible for common cold which infects the nasal epithelium and respiratory passage but not the lungs
 - The symptoms of common cold included nasal congestion and discharge, sore throat, gruffiness, cough, headache and tiredness
- Which of the statement given above is/are correct?
- Only I
 - Only II
 - I and II
 - None of these
164. The following diagram refers to protoplast fusion



Here A, B and C refers to

- a) A-Cellulase and b) A-Pectinase, B-
bactinase, B- Cellulase, C-Zygotic
Polyethylene glycol, cell
C-Somatic hybrid cell
- c) A-Proteinase, B- d) A-Cellulase,
Polyethylene glycol, pectinase, B-
C-Somatic hybrid cell Proteinase, C-Germ
cell

165. Consider the following statements

- I. Breeding of animal is very important for animal husbandry
II. Both the male and female animals selected for breeding should be of superior quality
III. The word 'husbandry' means the management of domestic affair
IV. In our country, poultry mainly means chickens, domesticated for egg
V. Cows and buffaloes generally give more milk than goats and sheep
VI. The yellow colour of buffalo milk is due to carotene

Which of the statement given above are true and which are false?

I II III IV V VI

- a) F F T T F F b) T T F F T F
c) T T T F T F d) F T F T T F

166. Which of the following is correct?

- I. Wine and beer are produced without distillation of fermented broth
II. Whisky, brandy and rum are produced by distillation of the fermented broth

III. Wine and beer are produced by distillation of the fermented broth

IV. Whisky, brandy and rum are produced without distillation of the fermented broth
Choose the correct option

- a) I and II
b) I and III
c) II and III
d) III and IV

167. ...A... released by LAB during growth coagulate and partially digest ...B... . Here A and B refers to

- a) A-Acid; B-milk b) A-Base; B-harmful
protein bacteria
c) A-Enzyme; B-milk d) A-Bacteria; B-other
protein microbes

168. Which one is a true statement regarding DNA polymerase used in polymerase chain reaction?

- a) DNA polymerase is responsible for DNA synthesis
b) It is isolated from Protozoa
c) It serves as a selectable marker
d) It is used to ligate introduced DNA in recipient plant cell

169. The first restriction endonuclease type II ...A..., was isolated by Smith, Wilcox and Kelley from ...B... bacterium. It was formed to cut DNA molecules at a particular point by recognizing a specific sequence of six base pairs, known as the ...C.... Here A, B and C can be

- | A | B | C |
|-------------------|-----------------------------------|----------------------|
| a) <i>Eco</i> RI | <i>Escherichia</i> RY 13 | Restriction sequence |
| b) <i>Eco</i> RII | <i>E. coli</i> R 245 | Recognition sequence |
| c) <i>Hind</i> II | <i>Haemophilus influenza</i> | Recognition sequence |
| d) <i>Bam</i> HI | <i>Bacillus amyloliquefaciens</i> | Restriction sequence |

170. In which of the following method, a probe is allowed to hybridise to its complementary DNA in the clone of cells?

- a) Gene therapy
b) Recombinant DNA technology
c) Polymerase chain reaction
d) Enzyme Linked Immuno-Sorbent Assay (ELISA)

171. Golden rice

- I. It is a transgenic variety of rice
II. It contains a goods quality of β -carotene

(provitamin-A)

III. β -carotene is a principal source of vitamin-A

IV. The grains of the rice are yellow in colour due to β -carotene. The rice is commonly called golden rice

Which of the statements given above are correct?

- a) I, II and III
- b) II, III and IV
- c) I, III and IV
- d) I, II, III and IV

172. Which of the following technique is based on the principle of antigen-antibody interaction?

- a) PCR
- b) ELISA
- c) Recombinant DNA technology
- d) Gene therapy

173. Which one of the following expressions is associated with a 'mangrove plant'?

- a) Capable of absorbing water rapidly and retaining it
- b) Capable of minimizing water loss and facilitating aeration to underground parts
- c) Capable of reducing transpiration and able to store absorbed water
- d) Presence of well organized leaves that are adapted to absorb nitrogenous matter

174. The science dealing with soil is

- a) Edaphology
- b) Paedology
- c) Pedology
- d) All of these

175. Which of the following organisms form the decomposers?

- a) *Pteris*
- b) Bacteria
- c) Saprophytic fungi
- d) Both (b) and (c)

176. Pyramids of biomass in pond ecosystem is

- a) Inverted
- b) Upright
- c) Linear
- d) Irregular

177. What is/are the correct explanations about higher diversity in tropical areas in comparison to the temperate areas?

- I. There are no favourable seasons in tropics
- II. Less solar energy is available in tropics
- III. Rate of extinction is low in tropics
- IV. Resource availability is higher in tropics

Choose the correct option

- a) I, III and IV
- b) I, II, III and IV
- c) I, II, III
- d) III and IV

178. What is the sustainable use of resources?

- a) Protected strips of the land that allows organisms to migrate from one wilderness area to another
- b) A law that makes it illegal to do harm to the species that are listed as endangered or threatened
- c) The ability to use natural resources in a way that helps people to protect the ecosystem
- d) The study of the methods to help protect biodiversity

179. Which of the following is non-biodegradable?

- a) Sewage
- b) DDT
- c) Livestock waste
- d) Market garbage

180. Which of the following are correctly matched?

- I. Arsenic poisoning - Black foot disease
 - II. Secondary effluent treatment - Biological process
 - III. Pyrolysis disposal - Solid soil waste
 - IV. *Tubifex* indicator - Water pollution
 - V. Biomagnification - Degradable pollutants
- a) I, II, III and V
 - b) I, III, IV and V
 - c) II, III, IV and V
 - d) I, II, IV and V

THOMAS Tutorials

Date :

NEET – 2016

TEST ID: 36

Time : 03:00:00

PCB

Marks : 720

: ANSWER KEY :

1)	d	2)	b	3)	b	4)	a	5)	c	6)	a	7)	d
8)	c	9)	c	10)	b	11)	c	12)	d	13)	a	14)	a
15)	d	16)	a	17)	a	18)	b	19)	b	20)	c	21)	b
22)	b	23)	d	24)	b	25)	b	26)	d	27)	b	28)	a
29)	b	30)	c	31)	a	32)	b	33)	c	34)	a	35)	a
36)	c	37)	d	38)	a	39)	a	40)	d	41)	d	42)	d
43)	d	44)	a	45)	c	46)	b	47)	a	48)	d	49)	d
50)	d	51)	a	52)	a	53)	c	54)	b	55)	a	56)	d
57)	b	58)	d	59)	d	60)	b	61)	a	62)	a	63)	d
64)	b	65)	b	66)	d	67)	c	68)	d	69)	d	70)	a
71)	c	72)	a	73)	b	74)	d	75)	b	76)	d	77)	c
78)	a	79)	b	80)	d	81)	b	82)	a	83)	b	84)	a
85)	a	86)	c	87)	b	88)	a	89)	c	90)	a	91)	c
92)	c	93)	a	94)	a	95)	b	96)	a	97)	d	98)	c
99)	a	100)	b	101)	b	102)	a	103)	c	104)	d	105)	b
106)	b	107)	b	108)	a	109)	d	110)	b	111)	d	112)	b
113)	c	114)	b	115)	d	116)	a	117)	c	118)	b	119)	c
120)	a	121)	b	122)	b	123)	d	124)	c	125)	c	126)	a
127)	b	128)	a	129)	b	130)	b	131)	d	132)	a	133)	a
134)	c	135)	d	136)	b	137)	c	138)	c	139)	a	140)	a
141)	d	142)	b	143)	c	144)	a	145)	d	146)	a	147)	a
148)	d	149)	a	150)	c	151)	b	152)	b	153)	c	154)	c
155)	c	156)	d	157)	b	158)	a	159)	b	160)	a	161)	d
162)	c	163)	c	164)	a	165)	c	166)	a	167)	a	168)	a
169)	c	170)	b	171)	d	172)	b	173)	b	174)	d	175)	d
176)	a	177)	d	178)	c	179)	b	180)	d				

: HINTS AND SOLUTIONS :

Single Correct Answer Type

1 (d)

$$\text{Surface Tension} = \frac{\text{Force}}{\text{Length}}$$

$$= \frac{[MLT^{-2}]}{[L]} = [ML^0T^{-2}]$$

$$\text{Spring constant} = \frac{\text{Force}}{\text{Length}}$$

$$= \frac{[MLT^{-2}]}{[L]} = [ML^0T^{-2}]$$

2 (b)

$$\text{Angular momentum} = mvr$$

$$= [MLT^{-1}][L] = [ML^2T^{-1}]$$

3 (b)

From the give graph. From 0s to 8s, particle is accelerated, then from 8 to 12 s, particle moves with constant acceleration. The form 12 to 16s, the particle is in the condition of deceleration. Hence, maximum velocity will be during 8s to 12s. During 0 to 4s, the acceleration will be function of time. The equation of straight lines is

$$a = \frac{5}{4}t$$

$$\therefore \frac{dv}{dt} = \frac{5}{4}t$$

$$\therefore v = \int_0^t \frac{5}{4} t dt = \frac{5}{4} \frac{t^2}{2} = \frac{5}{8} t^2$$

The velocity at $t = 4$ s is $u = 10 \text{ ms}^{-1}$

The distance travelled during 4 to 8 s is

$$\begin{aligned} s_2 &= ut + \frac{1}{2} at^2 \\ &= 10 \times 4 + \frac{1}{2} \times 5 \times 4^2 \\ &= 40 + 40 = 80 \text{ m} \end{aligned}$$

The velocity at $t = 8$ s is

$$v = 10 + 5 \times 4 = 30 \text{ ms}^{-1}$$

This is the maximum velocity.

Tricky approach: The area of $a - t$ graph gives change in velocity. The area of the graph from 0 to 8 s

$$= v - u = \frac{1}{2} \times 4 \times 5 + 4 \times 5 = 30$$

But $u = 0$

$$v = 30 \text{ ms}^{-1}$$

4 (a)

$$\text{From } h = \frac{1}{2} gt^2$$

$$\text{We have } t_{OB} = \sqrt{\frac{2h_{OA}}{g}}$$

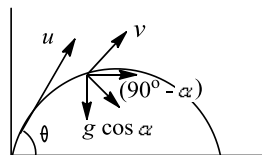
$$= \sqrt{\frac{2 \times 1960}{9.8}} = 20 \text{ s}$$

Horizontal distance $AB = vt_{OB}$

$$\begin{aligned} &= \left(600 \times \frac{5}{18}\right) (20) \\ &= 3333.33 \text{ m} = 3.33 \text{ km} \end{aligned}$$

5 (c)

Refer figure when the velocity vector makes an angle α with the horizontal, the component of acceleration, perpendicular to velocity, *ie*, the centripetal acceleration is $g \cos \alpha$. As horizontal component of velocity remains unchanged in angular projection of projectile, hence

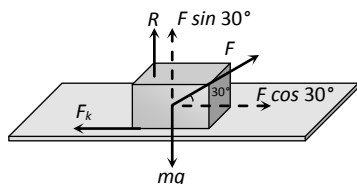


$$v \cos \alpha = u \cos \theta \text{ or } v = \frac{u \cos \theta}{\cos \alpha}$$

As, $g \cos \alpha$ provides centripetal acceleration, hence

$$g \cos \alpha = \frac{v^2}{r} \text{ or } \frac{v^2}{g \cos \alpha} = \frac{u^2 \cos^2 \theta}{g \cos^3 \alpha}$$

6 (a)



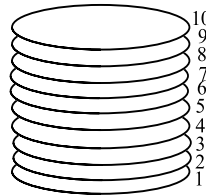
$$\text{Kinetic friction} = \mu_k R = 0.2(mg - F \sin 30^\circ)$$

$$= 0.2 \left(5 \times 10 - 40 \times \frac{1}{2} \right) = 0.2(50 - 20) = 6 \text{ N}$$

$$\text{Acceleration of the block} = \frac{F \cos 30^\circ - \text{Kinetic friction}}{\text{mass}}$$

$$= \frac{40 \times \frac{\sqrt{3}}{2} - 6}{5} = 5.73 \text{ m/s}^2$$

7 (d)



(a) Is correct 6th coin has four coins on its top which exert a force $4mg$ on it

(b) Is correct. 7th coin has three coins, placed over it. Thus 7th coin exerts a force $4mg$ on 6th coin (downwards)

(c) Is correct. As what is explained in (b), the reaction of 6th coin on the 7th coin is $4mg$ (upwards)

(d) Is wrong 10th coin, which is the topmost coin, experiences a reaction force of mg (upwards) from all the coins below it

8 (c)

$$W = Fs \cos \theta \Rightarrow \cos \theta = \frac{W}{F_s} = \frac{25}{50} = \frac{1}{2} \Rightarrow \theta = 60^\circ$$

9 (c)

As on torque is applies, angular momentum

$$\begin{aligned} L = I\omega &= \text{constant} = \left(\frac{2}{5} MR^2\right) \left(\frac{2\pi}{T}\right) \\ &= \text{constant } ie, \end{aligned}$$

$$\frac{R^2}{T} = \text{constant or } \frac{R_1^2}{T_1} = \frac{R_2^2}{T_2}$$

$$\begin{aligned} T_2 &= \frac{R_2^2}{T_2} T_1 = \left(\frac{xR_1}{R_1}\right)^2 \times 24 \text{ h} \\ &= 24 x^2 \text{ h} \end{aligned}$$

10 (b)

According to law of conservation of momentum $I\omega = \text{constant}$

When viscous fluid of mass m is dropped and start spreading out then its moment of inertia increases and angular velocity decreases. But when it falls from the platform moment of inertia decreases so angular velocity increases again

11 (c)

Landsats 1 through 3 operated in a near polar orbit at an altitude of 920 km with an 18 day repeat coverage cycle. These satellites circled the earth every 103 min completing 14 orbits a day.

12 (d)

$$Y = \frac{F}{A} \times \frac{l}{x} \text{ or } F = \frac{YAx}{l}$$

$$\text{Work done } W = \frac{1}{2} F \times x = \frac{1}{2} \frac{YAx'}{l}$$

$$= \frac{1 \times 2 \times 10^{11} \times (10^{-6}) \times (2 \times 10^{-3})^2}{2 \times 1} = 0.4 \text{ J}$$

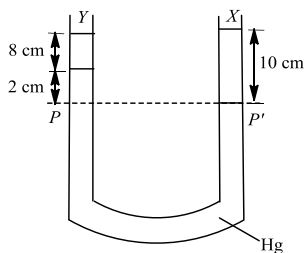
13 (a)

In level flight of aeroplane, $mg = pA$

$$\text{Or } p = \frac{mg}{A} = \frac{3 \times 10^4 \times 10}{120} \text{ Pa} = 2.5 \text{ kPa}$$

14 (a)

As shown in figure, in the two arms of a tube pressure remains same on surface PP' .



$$\text{Hence, } 8 \times \rho_y \times g \times 2 \times \rho_{\text{Hg}} \times g = 10 \times \rho_x \times g$$

$$\therefore 8\rho_y + 2 \times 113.6 = 10 \times 3.36$$

$$\text{or } \rho_y = \frac{36.6 - 27.2}{8} = 0.8 \text{ g cc}^{-1}$$

15 (d)

According to Stefan's law,

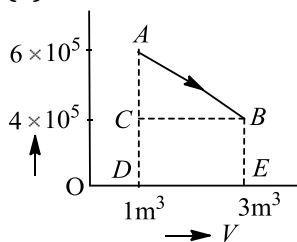
$$E \propto T^4$$

$$\text{or } \frac{E_2}{E_1} = \left(\frac{T_2}{T_1}\right)^4$$

$$\text{or } \frac{E_2}{E} = \left(\frac{T/2}{T}\right)^4 = \left(\frac{1}{2}\right)^4$$

$$\text{or } E_2 = \frac{E}{16}$$

16 (a)



Work done by the system

= area under $p - V$ diagram

= area of rectangle $BCDE$ + area of ΔABC

$$= 4 \times 10^5 \times 2 + \frac{2 \times 10^5 \times 2}{2}$$

$$W = 10 \times 10^5 \text{ J}$$

17 (a)

Heat absorbed by the system at constant pressure

$$Q = nc_p \Delta T$$

$$\text{Change in internal energy } \Delta U = nc_v \Delta T$$

$$W = Q - \Delta U$$

$$\therefore \frac{W}{Q} = \frac{Q - \Delta U}{Q} = 1 - \frac{\Delta U}{Q}$$

$$= 1 - \frac{nc_v \Delta T}{nc_p \Delta T} = 1 - \frac{c_v}{c_p}$$

$$= \left(1 - \frac{1}{\gamma}\right)$$

18 (b)

Temperature becomes $\frac{1}{4}$ th of initial value

$$[1200\text{K} = 927^\circ\text{C} \rightarrow 300\text{K} = 27^\circ\text{C}]$$

So, using $v_{rms} \propto \sqrt{T}$, $r.m.s.$ velocity will be half of the initial value

19 (b)

The equation for a harmonic progressive wave is

$$y = 6 \sin 2\pi(2t - 0.1x)$$

$$\Rightarrow y = 6 \sin(4\pi t - 2\pi \times 0.1x) \text{ This is of the form}$$

$$y = A \sin(\omega t - kx) \text{ where } k = \frac{2\pi}{\lambda} \therefore \lambda = 10\text{mm}$$

The phase difference for two particles separated

$$\text{by } 2 \text{ mm is } \phi = \frac{2\pi}{10} \times 2 \Rightarrow \phi = \frac{2\pi}{5} = 72^\circ$$

20 (c)

As X and Y have negligible mass, both the spring

balances read the same force $8kg$ or $8kg$

21 (b)

Superposition of waves does not alter the

frequency of resultant wave and resultant

amplitude

$$\Rightarrow a^2 = a^2 + a^2 + 2a^2 \cos \phi = 2a^2(1 + \cos \phi)$$

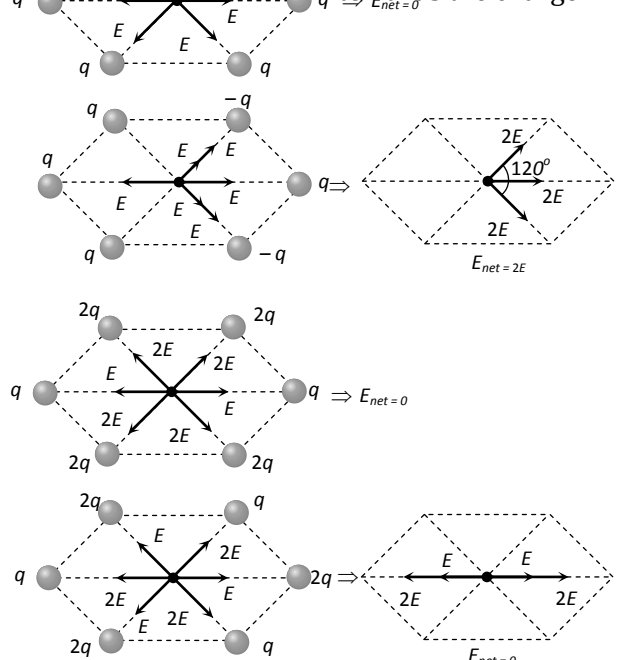
$$\Rightarrow \cos \phi = -1/2 = \cos 2\pi/3 \therefore \phi = 2\pi/3$$

22 (b)

Electric field at a point due to positive charge acts away from the charge and due to

negative charge it acts

towards the charge



23 (d)

Work done in rotating an electric dipole in an uniform electric field (E) through an angle θ from the direction of field is

$$W = pE(1 - \cos \theta)$$

Where p is electric dipole moment.

If the dipole is to be rotated to be and anti-parallel to the field ($\theta = 180^\circ$), then

$$W = pE(1 - \cos 180^\circ) \\ = pE[1 - (-1)] = 2pE$$

24 (b)

$$\text{Common potential} = \frac{C_1 V_0 + C_2 \times 0}{C_1 + C_2} = \frac{C_2 V_0}{C_1 + C_2}$$

$$U_{\text{before}} = \frac{1}{2} C_1 V_0^2$$

$$U_{\text{after}} = \frac{1}{2} C_1 \left[\frac{C_1 V_0}{C_1 + C_2} \right]^2 + \frac{1}{2} C_2 \left[\frac{C_1 V_0}{C_1 + C_2} \right]^2$$

$$= \frac{1}{2} \left[\frac{C_1 V_0}{C_1 + C_2} \right]^2 (C_1 + C_2)$$

$$\Rightarrow \frac{U_{\text{before}}}{U_{\text{after}}} = \frac{C_1 + C_2}{C_1}$$

$$\text{Here, } C_1 = C_2 = C$$

$$\therefore \frac{U_{\text{before}}}{U_{\text{after}}} = \frac{2C}{C}$$

$$\Rightarrow U_{\text{after}} = \frac{U}{2}$$

25 (b)

Force = Electric intensity \times charge

$$= \frac{\text{Potential difference}}{\text{distance}} \times \text{charge}$$

$$\therefore 4.8 \times 10^{-19} = \frac{V}{5} \times 1.6 \times 10^{-19}$$

or $V = 15$ volt

26 (d)

$$R_2 = n^2 R = (2)^2 \times 5.5 = 22 \Omega$$

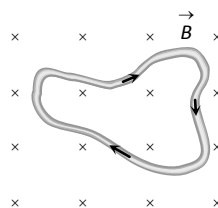
27 (b)

In parallel $P_{\text{consumed}} \propto \text{Brightness} \propto \frac{1}{R}$

$$P_A > P_B [\text{Given}] \therefore R_A < R_B$$

28 (a)

As shown in figure, since $\vec{L} = 0$



Hence according to $\vec{F} = i(\vec{L} \times \vec{B}) \Rightarrow \vec{F} = 0$

29 (b)

Here, $n = 500$ turns/m, $I = 1A$, $\mu_r = 500$

Magnetic intensity, $H = nI = 500m^{-1} \times 1A = 500Am^{-1}$

As $\mu_r = 1 + \chi$, where χ is the magnetic susceptibility of the material

or $\chi = (\mu_r - 1)$

Magnetisation, $M = \chi H = (\mu_r - 1)H$

$$= (500 - 1) \times 500Am^{-1} = 499 \times 500Am^{-1}$$

$$= 2.495 \times 10^5 Am^{-1}$$

$$= 2.5 \times 10^5 Am^{-1}$$

30 (c)

$$T = 2\pi \sqrt{\frac{1}{MB_H}} \Rightarrow T \propto \frac{1}{\sqrt{M}} \Rightarrow \frac{M_A}{M_B} = \left(\frac{T_B}{T_A} \right)^2 = \frac{4}{1}$$

31 (a)

In step-up transformer, number of turns in primary coil is less than the number of turns in secondary coil.

$$\text{ie, } \frac{N_s}{N_p} > 1$$

33 (c)

Resonance frequency in radian/second is

$$\omega = \frac{1}{\sqrt{LC}} = \frac{1}{\sqrt{8 \times 0.5 \times 10^{-6}}} = 500 \text{ rad/sec}$$

34 (a)

Total average energy = $\epsilon_0 E_{\text{rms}}^2$

$$= 8.85 \times 10^{-12} \times (720)^2$$

$$= 4.58 \times 10^{-6} \text{ Jm}^{-3}$$

37 (d)

Phase difference, $\phi = \frac{2\pi}{\lambda} \times \text{path difference}$

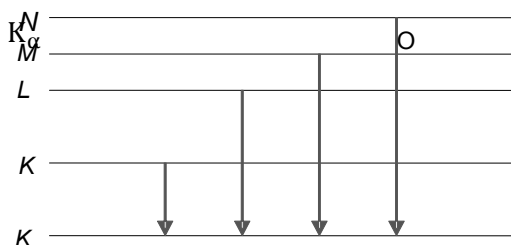
$$\phi = \frac{2\pi}{\lambda} \times \frac{\lambda}{6} = \frac{\pi}{3} = 60^\circ$$

Intensity, $I = I_0 \cos^2 \left(\frac{\phi}{2} \right)$

$$\frac{I}{I_0} = \cos^2(30^\circ) = \left(\frac{\sqrt{3}}{2} \right)^2 = 0.75$$

38 (a)

When the colliding electron remove an electron from innermost k -shell (corresponding to $n=1$) of atom and electron from some higher shell jumps to k -shell to fill up this vacancy, characteristic X-ray of k -series are obtained



$\therefore K_{\alpha}$ and K_{β} X-rays are emitted when there is transition of electron between the levels $n=2$ to $n=1$ and $n=3$ to $n=1$ respectively.

39 (a)

The velocity of photoelectrons depends upon the frequency of the incident light

40 (d)

For ground state, $n = 1$

For first excited state, $n = 2$

As $r \propto n^2$

\therefore radius becomes 4 times.

41 (d)

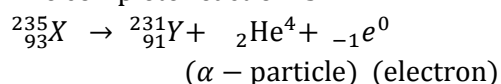
$$E = \Delta mc^2 \Rightarrow E = \frac{0.3}{1000} \times (3 \times 10^8)^2$$

$$= 2.7 \times 10^{13} \text{ J}$$

$$= \frac{2.7 \times 10^{13}}{3.6 \times 10^6} = 7.5 \times 10^6 \text{ kWh}$$

42 (d)

The complete reaction is



43 (d)

Efficiency of a rectifier is given by

$$\eta = \frac{\text{DC power output}}{\text{AC power input}}$$

For full wave rectifier

$$\text{DC power output} = I_{DC}^2 \times R_L = \left(\frac{2I_0}{\pi}\right)^2 \times R_L$$

$$\text{AC input power} = I_{\text{rms}}^2 (r_f + R_L) = \left(\frac{I_0}{\sqrt{2}}\right)^2 (r_f + R_L)$$

\therefore Rectifier efficiency

$$\eta = \frac{\left(\frac{2I_0}{\pi}\right)^2 R_L}{\left(\frac{I_0}{\sqrt{2}}\right)^2 (r_f + R_L)} = \frac{0.812 R_L}{r_f + R_L}$$

η will be maximum, if r_f is negligible as compared to R_L .

\therefore Maximum rectified efficiency = 81.2%.

44 (a)

1. The frequency used for satellite communication is greater than 30 MHz.

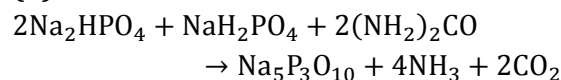
2. Uplink and downlink frequencies are different to avoid interference.

3. Geostationary satellite lies in the equatorial plane of great circle. It should revolve in an orbit concentric and coplanar with the equatorial plane.

45 (c)

$$\text{MUF} = v \sec \theta = 15 \sec 45^\circ = 15\sqrt{2} \text{ MHz}$$

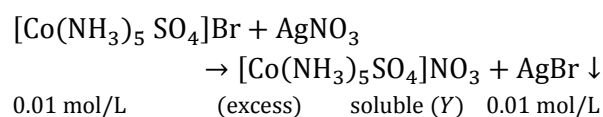
46 (b)



Hence, the stoichiometric ratio of sodium dihydrogen orthophosphate and sodium hydrogen orthophosphate is 2 : 1 or 3 : 1.5

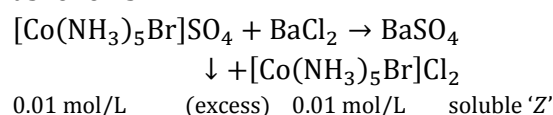
47 (a)

Mixture X contains 0.02 moles of $[\text{Co}(\text{NH}_3)_5\text{SO}_4]\text{Br}$ and 0.02 moles of $[\text{Co}(\text{NH}_3)_5\text{Br}]\text{SO}_4$ was prepared in 2L of solution. So, the concentration of $[\text{Co}(\text{NH}_3)_5\text{SO}_4]\text{Br}$ and $[\text{Co}(\text{NH}_3)_5\text{Br}]\text{SO}_4$ in solution are 0.01 mol/L and 0.01 mol/L respectively. During the reaction with AgNO_3 (excess), AgBr is precipitated as follows



Hence, number of moles of $Y = 0.01$

On addition of excess BaCl_2 , BaSO_4 is precipitated as follows



Hence, number of moles of $Z = 0.01$

Thus, the number of moles of Y and Z are 0.01 and 0.01 respectively.

49 (d)

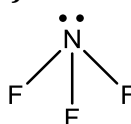
$${}_6\text{C} = 1s^2, 2s^2, 2p^2$$

For 6th electron; $n = 2, l = 1, m = -1$ and $s = +\frac{1}{2}$

50 (d)

Ionisation energy generally increases from left to right in a period but ionisation energy of nitrogen is greater than oxygen due to stable p^3 configuration. Hence, the order is as $C < O < N < F$

52 (a)



$$(\sigma\text{-bps} + \text{lps} = 3 + 1 = 4)$$

In NF_3 N-atoms is sp^3 -hybride, but due to presence of a lone pair of electron, NF_3 has pyramidal structure.

53 (c)

$$\frac{\text{M wt. of CO}_2}{\text{M wt. of SO}_2} = \frac{M_1}{M_2} = \frac{44}{64} = \frac{11}{16}$$

$$\text{approx} = \frac{2}{3}$$

54 (b)

\therefore 1 mole of $\text{H}_2\text{SO}_4 = 2$ g equivalent of H_2SO_4
Hence, when 1 mole of H_2SO_4 is mixed with 2 moles of NaOH , the heat evolved will be 2×57.3 kJ.

55 (a)

The decreasing order of bond dissociation energies of $\text{C}-\text{C}$, $\text{C}-\text{H}$ and $\text{H}-\text{H}$ bonds is as $\text{H}-\text{H} > \text{C}-\text{H} > \text{C}-\text{C}$

56 (d)

In the titration of weak acid with strong base, phenolphthalein is used

57 (b)

\therefore Oxidation state of Mn in $\text{Mn}^{2+} = +2$

\therefore Let oxidation state of Mn in $\text{MnO}_2 = x$

$$\therefore x + (2 \times -2) = 0$$

$$\therefore x = +4$$

iii) Let the oxidation state of Mn in $\text{KMnO}_4 = x$

$$\therefore +1 + x + (-2 \times 4) = 0$$

$$\therefore x = +7$$

iv) Let oxidation state of Mn in $\text{K}_2\text{MnO}_4 = x$

$$\therefore (+1 \times 2) + x + (-2 \times 4) = 0$$

$$\therefore x = +6$$

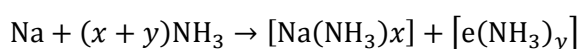
\therefore Increasing order of oxidation states is

$$(i) < (ii) < (iv) < (iii)$$

58 (d)

Oxidation takes place at anode (c) is not feasible, i.e., Cr^{3+} is not oxidised to $\text{Cr}_2\text{O}_7^{2-}$ under given conditions. Hence, option (d) is correct.

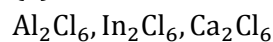
60 (b)



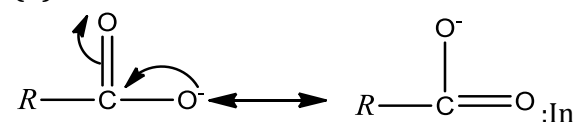
Sodium dissolves in liquid ammonia to produce deep blue colour in solution.

The blue coloured solution possesses high conducting power, strong reducing nature due to ammoniated electrons. The cation is also solvated by ammonia.

61 (a)



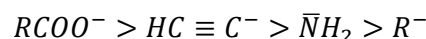
63 (d)



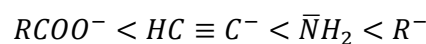
carboxylate ion, the negative charge is present on oxygen, a most electronegative element here, thus it is resonance stabilised.

$\text{HC} \equiv \text{C}^-$: Carbon is sp -hybridised so its electronegativity is increased higher relative to nitrogen.

$\bar{\text{N}}\text{H}_2$: Nitrogen is more electronegative than sp^3 -hybridised C-atom. From the above discussion, it is clear that the order of the stability of conjugated bases is as

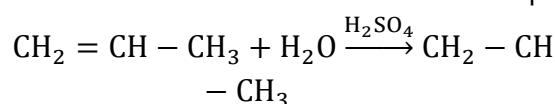


and higher is the stability of conjugated bases, lower will be basic character. Hence, the order of basic character is as



64 (b)

OH

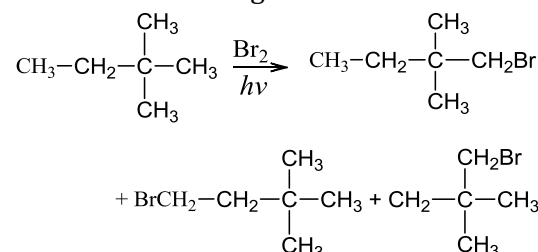


Propylene alcohol isopropyl alcohol

Thus, in this reaction isopropyl alcohol is formed.

65 (b)

The number of di- and poly-halogenation products depends upon (i) and the number of different types of hydrogens present in an alkane and (ii) the number of halogens introduced



66 (d)

Green house effect is caused by CO_2 .

67 (c)

Given, A solid has two elements = X and Z
Z are in ccp arrangement and X occupy all tetrahedral sites.

Let the number of atoms of Z in ccp arrangement = 100

\therefore Number of atoms of tetrahedral sites = 200

\therefore Number of atoms of X = 200 (\because They occupy all tetrahedral sites)

\therefore Ratio of X : Z = 200 : 100
= 2 : 1

\therefore The formula of compound is X_2Z .

68 (d)

$a = (\sqrt[2]{2}r)$ Packing fraction

$$\begin{aligned} &= \frac{2 \times \pi r^2}{(\sqrt[2]{2}r)^2} = \frac{2\pi r^2}{8r^2} \\ &= \frac{\pi}{4} = \frac{3.14}{4} = 0.7854 \\ &= 78.54\% \end{aligned}$$

69 (d)

According to Raoult's law,

$$P_A = P_A^\circ \chi_A$$

or

$$\begin{aligned} \chi_A &= \frac{P_A}{P_A^\circ} \\ &= \frac{32 \text{ mm Hg}}{40 \text{ mm Hg}} = 0.8 \end{aligned}$$

70 (a)

When 0.004 M Na_2SO_4 solution is isotonic with 0.01 M solution of glucose, so their osmotic pressures are equal to each other.

Osmotic pressure of 0.01 M glucose (π)_{glucose} = CST

\therefore C = concentration of solution = 0.01 M

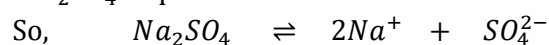
S = solution constant = 0.0821 L atm/K/mol

T = absolute temperature

$$\therefore \pi_{\text{glucose}} = 0.01 \times 0.0821 T \quad \text{---(i)}$$

$$\pi_{\text{glucose}} = \pi_{\text{Na}_2\text{SO}_4}$$

Na_2SO_4 is present in ionic state in solution



$$\text{At } t=0 \quad 1 \quad 0 \quad 0$$

$$\text{At equilibrium } 1 - \alpha \quad 2\alpha \quad \alpha$$

(where, α is the degree of dissociation of Na_2SO_4)

$$(\pi_{\text{cal}})_{\text{Na}_2\text{SO}_4} = C \times S \times T = 0.004 \times 0.0821 \times T$$

--(ii)

By van't Hoff factor

$$\frac{(\pi_{\text{obs}})_{\text{Na}_2\text{SO}_4}}{(\pi_{\text{cal}})_{\text{Na}_2\text{SO}_4}}$$

$$= \frac{\text{number of particles after dissociation}}{\text{number of particles before dissociation}}$$

$$= \frac{1 - \alpha + 2\alpha + \alpha}{1}$$

$$\therefore \frac{(\pi_{\text{obs}})_{\text{Na}_2\text{SO}_4}}{(\pi_{\text{cal}})_{\text{Na}_2\text{SO}_4}} = \frac{0.01 \times 0.0821 T}{0.004 \times 0.0821 \times T} = \frac{1 + 2\alpha}{1}$$

$$\therefore \frac{0.01 \times 0.0821 T}{0.004 \times 0.0821 \times T} = \frac{1 + 2\alpha}{1}$$

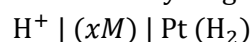
$$\text{Or } \frac{10}{4} = \frac{1 + 2\alpha}{1} \quad \text{or} \quad 10 = 4 + 8\alpha$$

$$\alpha = \frac{10 - 4}{8} = 0.75$$

$$\% \text{ of } \alpha = 75\%$$

71 (c)

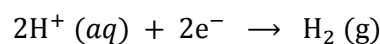
Reduction hydrogen half-cell is



+

Pressure p_{H_2}

Half-cell reaction is



Reaction quotient

$$= Q = \frac{P_{\text{H}_2}}{[\text{H}^+]^2}, n = 2$$

$$E_{\text{red}} = E_{\text{red}}^\circ - \frac{0.0591}{n} \log Q = 0 - \frac{0.0591}{2} \log Q$$

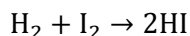
	P_{H_2}	$[\text{H}^+]$	Q	E_{red}
(a)	1atm	2.0 M	0.25	+ve
(b)	1atm	1.0 M	1.0	0
(c)	2atm	1.0 M	2.0	-ve
(d)	2atm	2.0 M	0.50	+ve

$E_{\text{red}}^\circ = 0.00 \text{ V}$ for standard hydrogen electrode

If $Q > 1$, then $E_{\text{red}} = -\text{ve}$.

Thus, correct answer is (c).

72 (a)



Rate of reaction,

$$= \frac{-d[\text{H}_2]}{dt} = \frac{-d[\text{I}_2]}{dt} = \frac{1}{2} \frac{d[\text{HI}]}{dt}$$

$$\text{Or } = \frac{-2d[\text{H}_2]}{dt} = \frac{-2d[\text{I}_2]}{dt} = \frac{d[\text{HI}]}{dt}$$

73 (b)

$$[\text{H}^+] = \frac{6 \times 10^{-7} \text{ mol}}{5 \times 10^{-5} \text{ L}} = 1.2 \times 10^{-2} \text{ M}$$

$$\text{rate} = \frac{dx}{dt} \text{ or } \frac{dx}{dt} = \frac{1.2 \times 10^{-2} \text{ M}}{6 \times 10^5 \text{ M/s}} = 2 \times 10^{-8} \text{ s}$$

74 (d)

The sky looks blue due to scattering of light.

75 (b)

Bronze is mixture of Cu and Sn

76 (d)

Pyrolusite – MnO_2

Malachite – $\text{CuCO}_3 \cdot \text{Cu(OH)}_2$

Diaspore – $\text{Al}_2\text{O}_3 \cdot \text{H}_2\text{O}$

Cassiterite – SnO_2

77 (c)

Ozone is used for purifying water because ozone kills bacteria, cysts, mold, parasites, viruses, contaminates etc. It is one of the effective way of eliminating microorganism in the water. Ozone is most effective oxidant. It inactivates and oxidises organic matter, contaminates, pesticides, viruses and bacteria faster than chlorine. Ozone do not form TMH which have unpleasant odour and also carcinogenic. Ozone is very good biocide, ozone also absorbs UV radiation.

78 (a)

When the quenched steel is heated to temperature below red hot and then allowed to cool slowly. It becomes soft. This process is known as annealing

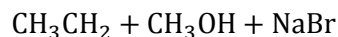
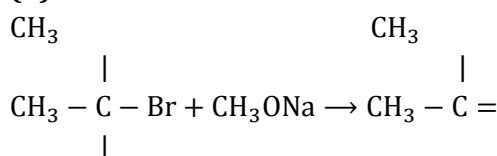
79 (b)

HgCl_2 compound is easily volatile. They are insoluble in water and soluble in acids.

80 (d)

Except alkynes, chain isomerism is observed when the number of carbon atoms is four or more than four

81 (b)



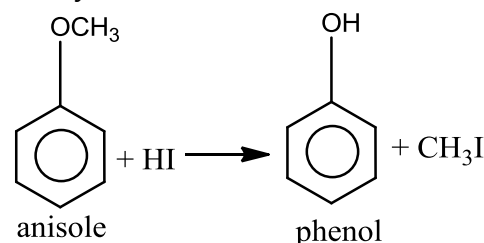
t-butyl bromide sodium 2-methyl propene

methanol

methoxide (isobutylene)

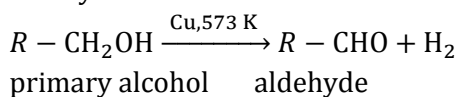
82 (a)

When an alkyl aryl ether is heated with HI, halogen goes with alkyl group. Therefore, heating anisole (methyl phenyl ether) with HI phenol and methyl iodide are obtained.



83 (b)

Primary alcohols get dehydrogenated with reduced copper at 573 K, to give corresponding aldehydes.



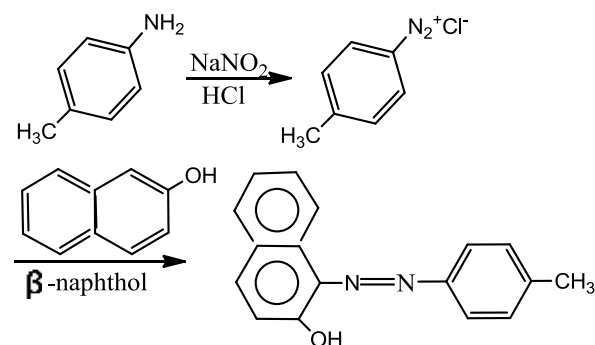
84 (a)

3. Organic compound gave an oxime with hydroxyl amine, therefore, it must be an aldehyde or ketone.
4. Organic compound did not give silver mirror with Tollen's reagent, therefore, it cannot be an aldehyde.

Therefore, compound is ketone and its molecular formulae with be CH_3COCH_3 .

86 (c)

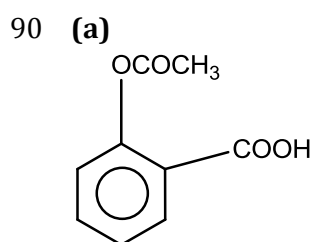
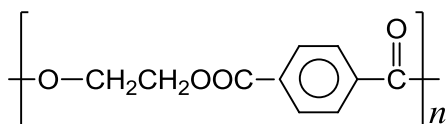
As we know, benzenediazonium salt forms brilliant coloured dye with β -naphthol, the compound under consideration must be *p*-toluidine (c) as it is a primary aromatic amine. Primary aromatic amine, on treatment with NaNO_2 in dil. HCl forms the corresponding diazonium chloride salt.



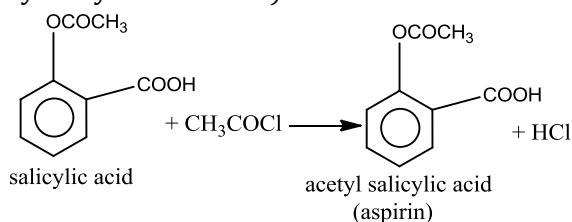
88 (a)

There are six carbon atoms in hexamethylenediamine and ten carbon atoms in sebacic acid, so the name of the nylon is nylon-6, 10. (Remember first the number of carbon atoms of amines are written).

- 89 (c)
Terylene is



Which is acetylated product of salicylic acid (*o*-hydroxy benzoic acid).



- 91 (c)
Out of four given categories, class is the largest category. Therefore, can categorise rest three categories; order, family and genus
Kingdom \rightarrow Division/Phylum \rightarrow Class \rightarrow Order \rightarrow Family \rightarrow Genus \rightarrow Species

- 92 (c)
The prime source of taxonomic studies is collection and identification of actual specimen. Nomenclature the present scientific method of naming the organism can be completed only when actual specimen is collected and identified

- 93 (a)
Group of organisms capable of interbreeding and producing fertile offsprings but reproductively isolated from other such group is called **species**.

- 95 (b)
Mycorrhiza is the symbiotic association between fungus and root of higher plants. The mycorrhizal roots are usually covered with fungal woolly outgrowth. Fungus growth does not cause any harm to the plant. Along with water phosphorus and nitrogen are also absorbed.

- 96 (a)
Ginkgo shows resemblance with both Cycadales and Coniferales. Resemblances between *Ginkgo* and Cycadales are well-developed nuellar beak and pollen chamber, haustorial nature of pollen tube, multiflagellated spermatozoids, large egg, massive female gametophyte with well-developed venter, endoscopic embryo with two cotyledons, hypogeal seed germination.

Its resemblance with Coniferales are cone like appearance, long and dwarf shoots, pycnoxylic wood, uniseriate medullary rays, longitudinal dehiscence of microsporangia and sessile ovule, etc.

- 97 (d)
The rhizoids in *Funaria* arise from the **basal region** of the stem, which functions as roots.

- 98 (c)
True segmentation is also called metamerism

- 99 (a)
Cow and buffalo are secondary hosts for *Taenia saginata*.

- 100 (b)
Cockroach, scorpion and prawn belong to phylum-Arthropoda.

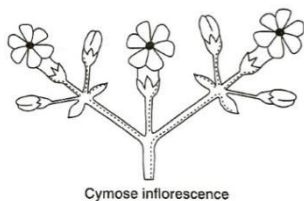
- 101 (b)
Acacia (family-Mimosaceae) has single carpel in ovary.
Lettuce (*Lactuca sativa*, family-Asteraceae) has two carpels in ovary.
Red squill (family-Liliaceae) has three carpels.

- 102 (a)
In the given diagram, there is no flower at the tip of shoot. So, it have indefinitely growth. The flower borne laterally



Racemose inflorescence

In cymose, the shoot tip ends with a terminal flower so it have limited growth



103 (c)

The **companion cells** are found in angiosperms only, in gymnosperms no companion cells present but some special parenchyma cells associated to sieve cells, which are known as 'albuminous cells'.

104 (d)

The leaf is a lateral, generally flattened structure borne on the stem. It develops at the node and bears a bud in its axil. The axillary bud later develops into a branch. Leaves originate from shoot apical meristems and are arranged in an acropetal order. They are the most important vegetative organs for photosynthesis

105 (b)

In a dicot stem, secondary growth occurs due to lateral meristem.

106 (b)

Monocots have atactostele, in which vascular bundles are arranged into more than one ring and they are usually found at the centre of the stem

107 (b)

The number of vasa efferentia that arises from the testes in frog's male reproductive system is 10-12. They enter the kidneys on their sides and open into the Bidder's canal and finally, it communicates with the urinogenital duct that comes out of the kidneys and opens into the cloaca

108 (a)

Excretory system of a frog consists of a pair of kidneys, ureters, urinary bladder and cloaca

109 (d)

According to Chargaff's rule, in DNA, the proportion of adenine always equals to that of thymine and proportion of guanine always equal to that of cytosine, *i. e.*, A=T and G=C. Thus, in a DNA, if guanine is 20%, cytosine also will be 20%. So, both adenine and thymine together will be 60%, *i. e.*, 30% adenine and 30% thymine.

110 (b)

Primary wall of eukaryotic cell is made up of a polymer of β , 1-4 acetyl glucosamine

111 (d)

In fluorescence microscopy, the object is stained with a fluorescent substance and

when stained cell or all parts are observed through ordinary microscope using UV light, appear as luminous objects. This technique is helpful to show the fluidity of biomembranes.

112 (b)

Catabolic and anabolic pathways are often coupled in a cell because the free energy released from one pathway is used to drive other pathways

113 (c)

G₂-phase or second gap phase is the gap between DNA synthesis and division. This particular phase is spent in synthesizing molecules other than DNA, which are required for cell division.

114 (b)

Metaphase plate is the plane of alignment of the chromosomes at metaphase.

During metaphase, spindle fibres attach to kinetochores of chromosomes.

Chromosome are moved to spindle equator and get aligned along metaphase plate through spindle fibres to both poles

115 (d)

A-Stomal aperture, B-Guard cell, C-Cellulosic microfibrils

116 (a)

Pulsation theory for ascent of sap was proposed by an eminent Indian scientist **J C Bose**.

117 (c)

It is because of the close packing of water molecules in the inter spaces and over the surface of the imbibant particles

118 (b)

By process of nitrogen fixation atmospheric nitrogen is fixed as nitrate which by denitrification converted to ammonia.

119 (c)

Deficiency of zinc causes leaf malformations like little leaf, leaf rosettes, interveinal chlorosis, khaira disease of rice and several types of leaf distortions.

Deficiency of molybdenum causes whiptail disease, loosening of inflorescence in cauliflower.

120 (a)

C₄-plants have very little photorespiration because its initial carbon fixation is done by PEP carboxylase not by Rubisco. Beside this, C₄-plant

generate their own CO_2 by decarboxylation of C_4 acids in bundle sheath. Due to these reasons, the C_4 -plants minimise photorespiration

121 (b)

C_3 -pathway.

Plants that are adapted to dry tropical regions generally have the C_4 pathway. Though these plants have the C_4 -oxaloacetic acid as the first CO_2 fixation product they use the C_3 pathway or the Calvin cycle as the main biosynthetic pathway

122 (b)

Pentose Phosphate Pathway (or Warburg-Lippman Dickens cycle) is an alternate method of aerobic respiration, which occurs in the cytoplasm of mature cell. This pathway accounts for 60% of total respiration in liver cells. In this, for every six molecules of glucose, one molecule is completely oxidized in CO_2 and reduced coenzymes, while 5 are regenerated.

123 (d)

In respiration, whether it is aerobic or anaerobic glucose undergoes oxidation to form energy. In plants glucose is derived from sucrose which is the end product of photosynthesis or from storage carbohydrate. Sucrose is converted into glucose and fructose by the enzyme invertase to enter into the first step of respiration which is glycolytic pathway

124 (c)

Ethylene is a simple gaseous PGR. It is synthesised in large amounts by tissues undergoing senescence and ripening fruits

125 (c)

Absolute Growth Rate (AGR) is the comparison of total growth per unit time

Initial surface area = 5 cm^2 , Final surface area = 10 cm^2

$\text{AGR} = \text{Final surface area} - \text{Initial surface area}$
 $= 10 - 5 = 5$

Relative Growth Rate (RGR)

$$= \frac{\text{Final surface area} - \text{Initial surface area}}{\text{Initial surface area}} \times 100$$

$$= \frac{10 - 5}{5} \times 100 \Rightarrow 100 = 100$$

126 (a)

A – Hypocotyl

B – Cotyledons

C – Seed coat

D – Epicotyle hook

127 (b)

Fe, I, Mn, Cu, Zn and fluorine are required in

minimum amount by human.

128 (a)

Gastrin hormone is secreted by mammalian stomach and duodenal mucosae in response to proteins and alcohol. This hormone stimulates gastric glands to secrete large amount of gastric juice. However, its over- secretion may cause gastric ulcers.

129 (b)

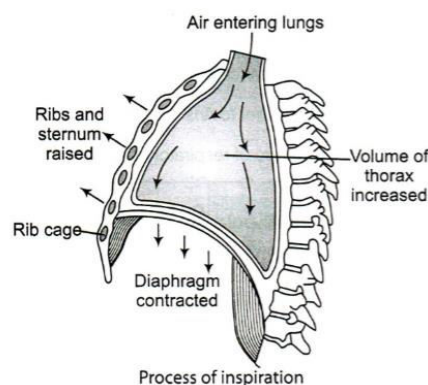
Pulmonary volume increases by the following steps

(i) Contraction of the diaphragm

(ii) Contraction of intercostal muscle

(iii) Lifting of the ribs

(iv) Sternum causing an increase in the volume of thoracic chamber in dorso ventral axis



130 (b)

Pressure contributed by the individual gas in a mixture of gases is called partial pressure and is represented as ρO_2 for oxygen and ρCO_2 for carbon dioxide

131 (d)

Blood platelets occur only in mammals. They are non-nucleated, round or oval biconvex and bud from megakaryocytes. They are much smaller than RBC. Blood platelets are the source of thromboplastin, necessary for blood clotting

132 (a)

Lub The first heart sound is associated with the closure of tricuspid and bicuspid valves

Dub The second heart sound is associated with the closure of semilunar valves

133 (a)

Micturition is a reflex of voiding urine. If the urine content of urinary bladder reaches more than 300 mL micturition reflex starts. Neural mechanism of micturition is called micturition reflex

134 (c)

Cortex region of kidney is outer region. The proximal end of each nephron forms a blind or closed enlarged and double walled cup, the

Bowman's capsule in the cortex. Thus, all the Bowman's capsules of the kidney are found in the cortex.

135 (d)

In humans, the principle nitrogenous excretory compound (*i. e.*, urea) is synthesized in liver by ornithine cycle. Urea is eliminated mostly through kidney as excretory product.

136 (b)

Parallely arranged filament of muscle fibre. Each muscle fibre is lined by the plasma membrane called sarcolemma enclosing the sarcoplasm. Muscle fibre is a syncytium as the sarcoplasm contains many nuclei. The endoplasmic reticulum, *i.e.*, sarcoplasmic reticulum of the muscle fibres is the store house of calcium ions. A characteristic feature of muscle fibre is the presence of large number of parallely arranged filaments in the sarcoplasm called myofilaments or myofibrils

137 (c)

Jugal is a narrow wavy bone. It connects zygomatic processes of squamosal and maxilla forming 'zygomatic arch'.

138 (c)

A-Ciliated B-Trachea, C-Amoeboid

139 (a)

Limbic system.

The inner parts of cerebral hemisphere and a group of associated deep structures like amygdala, hippocampus, etc. form a complex structure called the limbic lobe or limbic system along with hypothalamus. It is involved in the regulation of sexual behavior expression of emotional reactions, (*e. g.*, excitement, pleasure, rage and fear) and motivation

140 (a)

Our paired eyes are located in sockets of skull called orbits. The adult human eyeball is nearly spherical in structure. The wall of the eyeball is composed of three layers. The anterior portion of this layer is called cornea. The middle layer choroid contains many blood vessels and looks bluish in colour

The inner layer is retina and it contains three layers of cells, *i.e.*, from inside to outside called ganglion cells, bipolar cells and photoreceptor cells

141 (d)

Cystic duct transports insulin and glucagon to target organ.

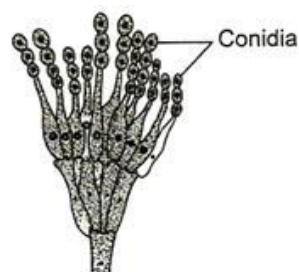
142 (b)

Parathyroid Hormone (PTH) increases the Ca^{2+} in the blood. PTH acts on bones and stimulates the process of bone resorption (dissolution/demineralisation). PTH also stimulates the reabsorption of Ca^{2+} by the renal tubules and increases Ca^{2+} absorption from the digested food. It is thus clear that PTH is hypercalcemic hormone, *i.e.*, it increases the blood Ca^{2+} level. Along with TCT, it plays a significant role in calcium balance in the body

143 (c)

Bodies involved in asexual reproduction

Conidia are non-motile gametes found singly or in chain on the parent body, *e. g.*, *Penicillium*



Conidia formation in *Penicillium*

False **Gemmule formation** is the type of reproduction in which the buds are formed with in the parent body, *e. g.*, Sponge



Gemmule formation in sponge

145 (d)

Endosperm may either be completely consumed by the developing embryo (*e. g.*, pea, ground nut, beans) before seed maturation or it may persist in mature seed (*e. g.*, castor and coconut) and may be used up during seed germination. The first condition is called endospermic, while second condition is called non-endospermic

146 (a)

Two polar nuclei are located in **embryo sac**, which participate in triple fusion.

147 (a)

Chalazal pole is present just, opposite to the micropylar end and chalaza represents the basal part of the ovule

148 (d)

A- Antrum, B- Secondary follicle, C-Tertiary follicle

149 (a)

Ectoderm.

Fate of three germ layers

Mesoderm Dermis of skin, circulatory system, muscles, bones (except facial)

Endoderm Lining of GI tract, lining of lungs, kidney ducts and bladder, thymus, thyroid tonsils

Ectoderm Epidermis of skin, tooth enamel, lens and cornea of the eye outer ear Brain and spinal cord, facial bones skeletal muscles in the head

150 (c)

Fertilized zygote is divided by special type of mitotic divisions, known as **cleavage**. Cleavage increases the number of cells.

151 (b)

Ageing is retarded by CKN (cytokinins).

152 (b)

A developing embryo is transplanted in the uterus of another female. A woman who substitutes or takes place of the real mother to nurse the embryo is called surrogate mother

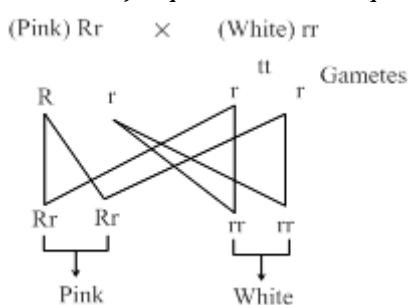
153 (c)

Generally, AIDS detection is done by ELISA (Enzyme Linked Immuno Sorbent Assay). But sometimes the results of this technique may prove false. So, by combining it with PCR (Polymerase Chain Reaction), the reliability of the detection of AIDS increases

154 (c)

Intermediate inheritance also called the incomplete dominance. In that inheritance the phenotypic and genotypic ratio are same. The classical examples are = four O' clock plant and snapdragon.

Mirabilis jalapa shows incomplete dominance



The ratio of pink and white flower will be 1 : 1

155 (c)

Genes which codes for a pair a contrasting traits is called alleles. They are slightly different forms of

the same gene, e. g., TT, tt, tT

156 (d)

The genes which individually have a small effect but collectively produce significant phenotypic expression are called polygenes. The inheritance of these genes is called polygenic inheritance, e.g., skin colour in human.

157 (b)

There are two types of nucleic acids found in living system

I. DNA-Deoxyribonucleic Acid

II. Ribonucleic Acid

158 (a)

Twins are of two types

(i) **Monozygotic twins** Twins which are formed by one zygote. In them, the genetic constituent remains the same. They are useful for studying environmental effects on the genetic makeup. Most of the twins are monozygotic twins. They are also called maternal twins

(ii) **Dizygotic Twins** Twins which are formed by two zygotes when two sperms fertilizes the two ova at the same time then dizygotic twins are formed. They have different genetic make up so, they cannot be used to study influence of environment on genetic make up. They are also called paternal twins

159 (b)

The evolutionary process, which produces new species, diverged from a single ancestral form adapted to new invaded habitats and to modes of life necessary there, is known as adaptive radiation

160 (a)

Theory of continuity of germplasm was give by **August Weismann** (1834-1914).

Theory of continuity of germplasm by **August Weismann** (1834-1914). A German biologist, was the main opposer of the inheritance of acquired characters. He put forward the theory of continuity of germplasm. According to Weismann, the characters influencing the germ cells are only inherited. There is a continuity of germplasm (protoplasm of germ cells) but the somatoplasm (protoplasm of somatic cells) is not transmitted to the next generation. Hence, it do not carry characters to the next generation. Weismann cut off the tails of rats for as many as 22 generations and allowed them to breed, but tailless rats were never born

- 161 **(d)**
Immuno-modulators are natural or synthetic substances that help to regulate or normalize the immune system. There are two types of immuno-modulators *viz* immuno-suppressants, which cause immuno-suppression of the immune system and immuno-stimulants (immuno-stimulators) which stimulate immune system by including or increasing activity of any of its components.
- 162 **(c)**
Ascaris (the common roundworm) and *Wuchereria* (the filarial worm), are some of the helminths which are known to be pathogenic to man. *Ascaris*, an intestinal parasite causes ascariasis and *Wuchereiacaus* filariasis
- 163 **(c)**
Rhinovirus represents one such group of viruses, which causes one of the most infectious human ailments- the common cold. They infect the nose and respiratory passage. Symptoms of common cold are nasal congestion and discharge, sore throat, hoarseness, cough, headache, tiredness, etc.
- 164 **(a)**
A-Cellulase and pectinase, B-Polyethylene glycol, C-Somatic hybrid cell
- 165 **(c)**
In our country, poultry mainly means chickens domesticated for eggs and meat Cow milk is slightly yellow in colour due to presence of carotene, which is precursor for yellow colour in cow milk is in the form of vitamin-A
- 166 **(a)**
Wine and beer are produced without distillation of fermented broth
Whisky, brandy and rum are produced by distillation of the fermented broth
- 167 **(a)**
A-Acid; B-Milk protein.
Lactic Acid Bacteria (LAB) like *Lactobacillus* are added to milk. It converts lactose sugar of milk into lactic acid. Lactic acid causes coagulation and partial conversion of milk protein casein to cal paracaesinate. Milk is changed into curd, yoghurt and cheese
- 168 **(a)**
DNA polymerase which is stable at high temperature ($>90^{\circ}\text{C}$) is required to carry out the synthesis of new DNA. The DNA polymerase like *Taq* polymerase is generally used in PCR reactions which is isolated from a bacterium *Thermus aquaticus*
- 169 **(c)**
The first restriction endonuclease type II was isolated by Smith, Wilcox and Kelley from *Haemophilus influenza* bacterium. It was formed to cut DNA molecules at a particular point of recognizing a specific sequence of six base pairs, known as the recognition sequence
- 170 **(b)**
In recombinant DNA technology, a probe is allowed to hybridise to its complementary DNA in the clone of cells. The cells are then detected by autoradiography. The cells with mutated genes will not be observed on the photographic film because the probe was not complementary to the mutated genes
- 171 **(d)**
Golden rice is developed of Swiss Federal Institute of Technology. The rice grains are golden yellow in colour due to the presence of β -carotene. It contains 'beta carotene' gene from daffodil plants and also genes from some bacteria. Golden rice will prevents child blindness caused due to deficiency of vitamin-A
- 172 **(b)**
ELISA is based on the principle of antigen-antibody interactions. It can detect very small amount of proteins (antibody or antigen) with the help of enzymes (*e. g.*, peroxidase or alkaline phosphatase)
- 173 **(b)**
Mangrove plants are capable to minimize water loss and facilitate aeration to underground parts.
- 174 **(d)**
The science dealing with study of soil is called edaphology or Paedology or Pedology
- 175 **(d)**
Decomposers are saprotrophs, which decompose the organic remains. These are saprophytic fungi and bacteria.
- 176 **(a)**

Ecosystem	Shape of Pyramid
Pyramid of number	
Grassland	Upright
Forest (tree)	Inverted
Aquatic (pond)	Upright
Pyramid of biomass	
Grassland	Upright
Forest	Upright
Aquatic (lake)	Inverted

Pyramid of energy	
All ecosystems	Upright

177 **(d)**

There are various hypothesis for higher diversity in tropical areas

(i) Speciation is a function of time. Temperate areas have undergone frequent glaciation in the past. It killed most of the species. No such disturbance occurred in tropics where species continued to flourish and evolved undisturbed for millions of years

(ii) There are no unfavourable seasons in tropics. Continued favourable environment has helped tropical organisms to gain more niche specialisation and increased diversity

(iii) More solar energy is available in tropics. This promotes higher productivity and increased biodiversity

(iv) Resource availability is higher in tropics

(v) There is reduced competition in tropics due to favourable environment

(vi) Rate of extinction is low in tropics

178 **(c)**

Conservation of biodiversity is the protection, uplift and scientific management of biodiversity so as to maintain it at its optimum level and derive sustainable benefits for the present as well as future generations. Sustainable use is the

ability to use natural resources in a way that helps people and protects the ecosystem

179 **(b)**

The materials and poison such as aluminium ions, mercurial salts and DDT that either do not degrade or degrade only extremely slowly in the natural environment are called **non-biodegradable pollutants**.

180 **(d)**

Biomagnification or **biological amplification** is the passing of non-degradable pollutants like pesticides (DDT), etc, into the food chain and increase in amount per unit weight of organisms with the rise in trophic level due to accumulation in the body.